






## Mathematics

## Number 14-Money

Is there enough money to buy each item?

1. Count and write the amount of money on the line.
2. Then, select **yes** or **no** if you can buy the item.

Item and Cost	Money	Can you buy it? yes or no
\$14 	<div>\$10</div> <div>\$1</div>	\$ _____  yes or no
\$14 	<div>\$5</div> <div>\$5</div> <div>\$1</div> <div>\$1</div> <div>\$1</div> <div>\$1</div>	\$ _____  yes or no
\$14 	<div>\$5</div> <div>\$5</div> <div>\$1</div> <div>\$1</div>	\$ _____  yes or no
\$14 	<div>\$1</div> <div>\$10</div> <div>\$1</div> <div>\$1</div>	\$ _____  yes or no
\$14 	<div>\$1</div> <div>\$1</div> <div>\$1</div> <div>\$1</div> <div>\$1</div> <div>\$1</div> <div>\$1</div> <div>\$1</div> <div>\$1</div> <div>\$1</div> <div>\$1</div>	\$ _____  yes or no