



# TEST

Banmaireab School – English Program

The Development of English Educational Management for Schools under the Phuket Provincial Administration Project  
Suan Sunandha Rajabhat University

Nickname \_\_\_\_\_

No. \_\_\_\_

P1/\_\_\_\_

1. Connect the words:

heavier than

เบากว่า

lighter than

หนักกว่า


heaviest

เบาที่สุด

lightest

หนักที่สุด

2.



The cat is \_\_\_\_\_ the monkey.

a. lighter than

b. heavier than

c. as heavy as


3.



The zebra is \_\_\_\_\_ the monkey.

- a. lighter than                      b. heavier than                      c. as heavy as

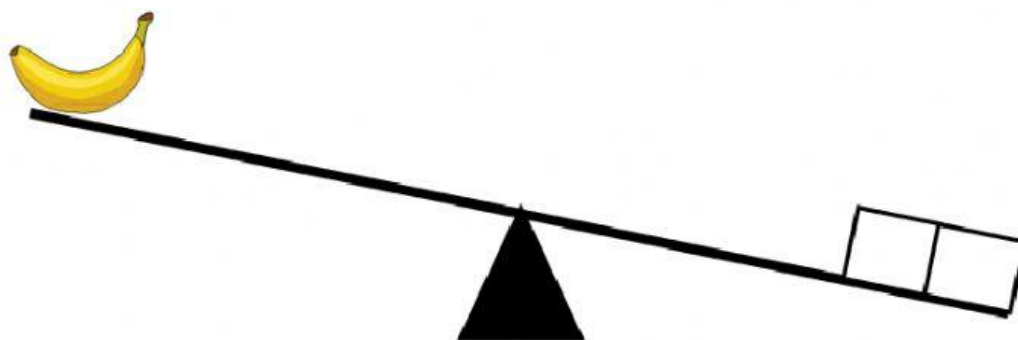
4.



The cat is \_\_\_\_\_.

- a. lighter than 1 block                      b. heavier than 4 blocks  
c. as heavy as 4 blocks

5.




The banana is \_\_\_\_\_.

a. lighter than 2 blocks

b. as heavy as 2 blocks

c. heavier than 5 blocks

6.



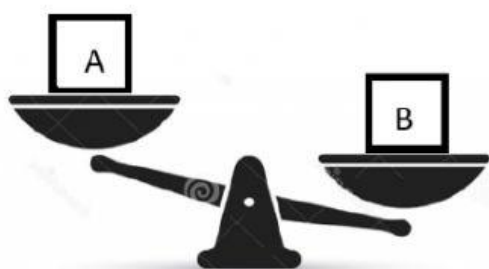
Which is lighter, the banana or the grapes?



a. grapes

b. banana

6.



Which is the lightest?

Block A

Block B

Block C

Which is the heaviest?

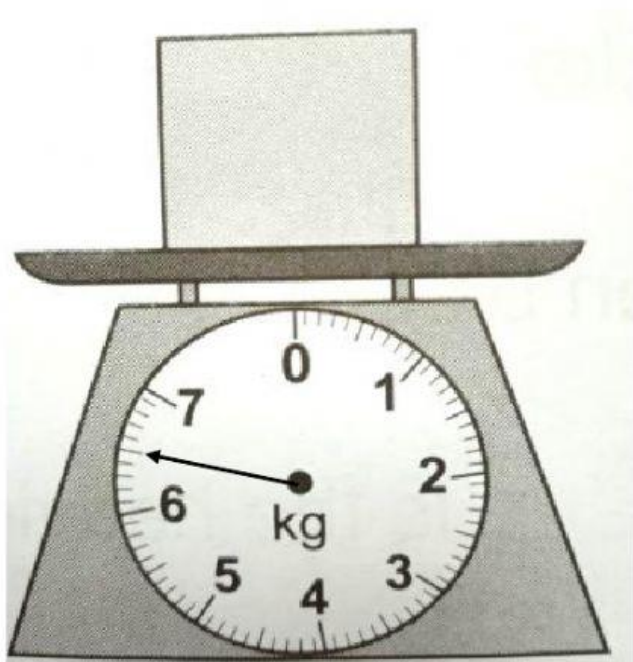
Block A

Block B

Block C

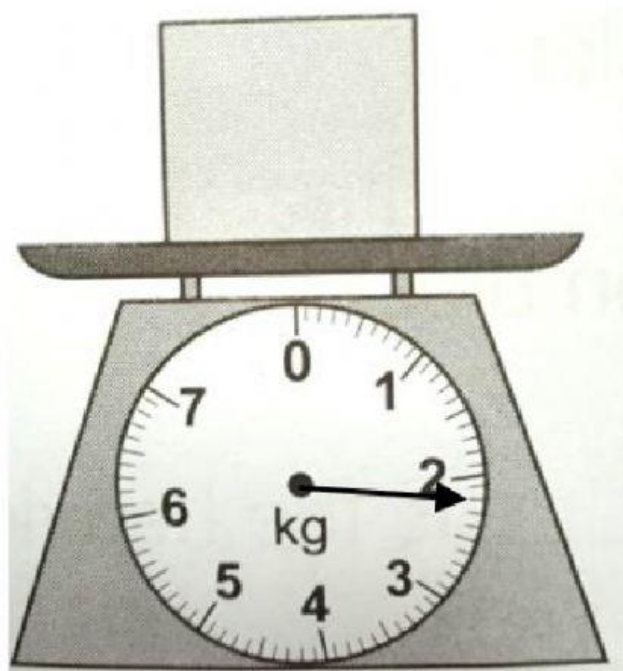
7. Read the scale.

a)



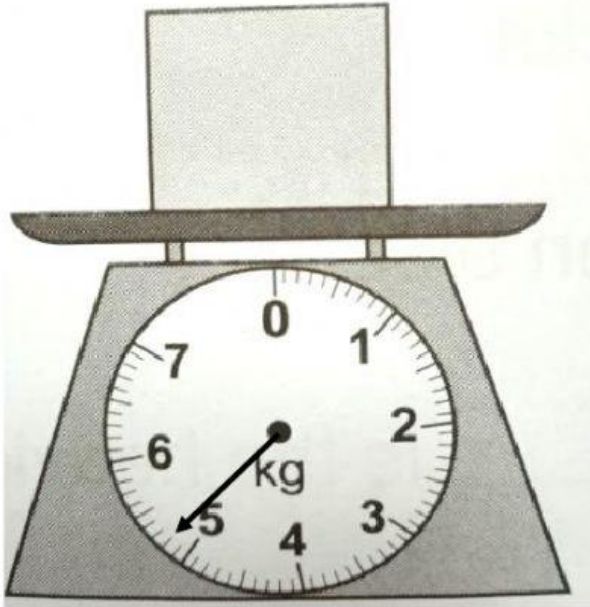
\_\_\_\_\_ kg \_\_\_\_\_ kheed

b)




\_\_\_\_\_ kg \_\_\_\_\_ kheed

c)



\_\_\_\_\_ kg \_\_\_\_\_ kheed

d)



\_\_\_\_\_ kg \_\_\_\_\_ kheed

8. Fill in below:

$$1 \text{ kg } 6 \text{ kheed} = \text{_____ kheed}$$

$$2 \text{ kg } 8 \text{ kheed} = \text{_____ kheed}$$

$$3 \text{ kg } 4 \text{ kheed} = \text{_____ kheed}$$

$$23 \text{ kheed} = \text{___ kg ___ kheed}$$

$$18 \text{ kheed} = \text{___ kg ___ kheed}$$

9. Add and subtract:

$$5 \text{ kg } 3 \text{ kheed} - 4 \text{ kg } 1 \text{ kheed} = \text{ \_\_\_ kg \_\_\_ kheed}$$

$$2 \text{ kg } 5 \text{ kheed} - 1 \text{ kg } 2 \text{ kheed} = \text{ \_\_\_ kg \_\_\_ kheed}$$

$$1 \text{ kg } 2 \text{ kheed} - 3 \text{ kheed} = \text{ \_\_\_ kheed}$$

10. **How much heavier** is the cat than the rooster?



8 kg



11 kg

- a. 8 kg
- b. 11 kg
- c. 3 kg