

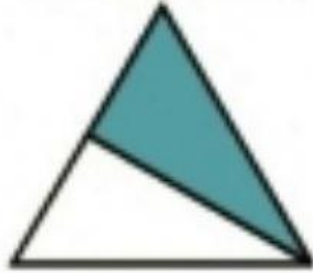
Name -

Class:- IV Subject:- Maths

రంగు వేయబడిన భాగం ఎంత?

(క్లిక్ చేయండి)

How much is the shaded part?




☐ 1/2

☐ 1/4

☐ 2/4

☐ 3/4




☐ 1/2

☐ 1/4

☐ 2/4

☐ 3/4



☐ 2/4

☐ 1/4

☐ 1/2

☐ 3/4




☐ 2/4

☐ 1/4

☐ 1/2

☐ 3/4



☐ 2/4

☐ 1/4

☐ 1/2

☐ 3/4