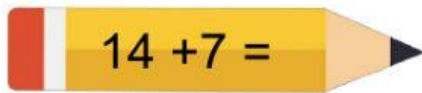
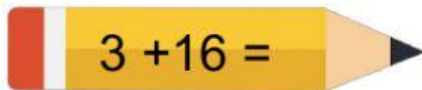


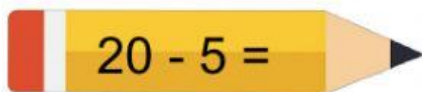
Kerjakanlah soal penjumlahan dan pengurangan di bawah ini dengan menarik garis ke jawaban yang tepat!

 $14 + 7 =$

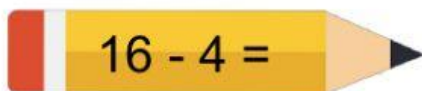
**12**

 $3 + 16 =$

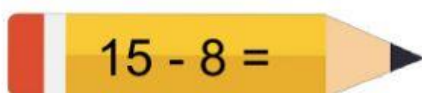
**7**

 $20 - 5 =$

**19**

 $16 - 4 =$

**21**

 $15 - 8 =$

**15**