





Resuelva las siguientes sumas y restas

C	D	U
		
5	3	7
2	8	3
<hr/>		

C	D	U
		
3	6	5
5	3	8
<hr/>		

		
724		
- 351		
<hr/>		
		

		
926		
- 450		
<hr/>		
		