






ECONOMIC SECTORS

1.- MATCH THE PHOTOS TO THE JOBS.

carpenter

doctor

farmer

miner





craft worker

factory worker

lorry driver

bus driver

shop assistant

2.- CHOOSE THE CORRECT OPTION.

- a** Doctors, teachers and taxi drivers work in the tertiary sector.
- b** Fishers, farmers and miners work in the _____ sector.
- c** People who work on the assembly line in a factory work in the _____ sector.
- d** Craft workers who make pottery, jewellery and clothing work in the _____ sector.
- e** Hairdressers, tour guides and shop assistants work in the _____ sector.

3.- COMPLETE THE TABLE WITH THE AREAS OF WORK FROM THE BOX.

-health care- mining crafts fishing education farming tourism chemical		
primary sector	secondary sector	tertiary sector
		health care

4.- MATCH THE WORKERS TO THE AREAS OF WORK.

a. farmer	1. health
b. craft worker	2. farming
c. doctor	3. crafts
d. teacher	4. fishing
e. fisher	5. transport
f. taxi driver	6. retail
g. shop assistant	7. mining
h. miner	8. education