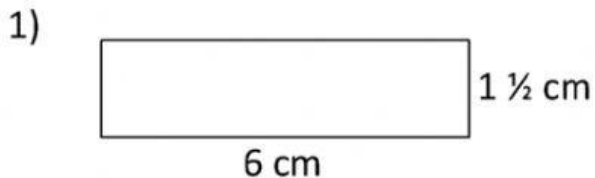
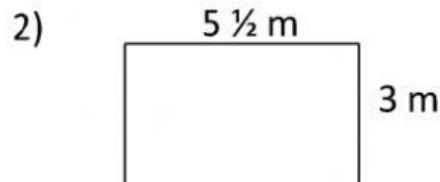




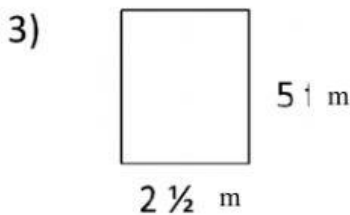
**Q1. Find the Perimeter of the following figure:-**



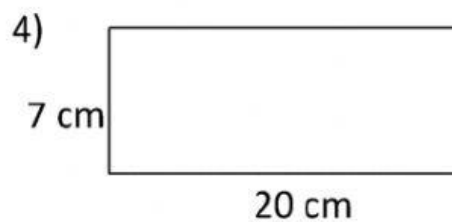
Perimeter = \_\_\_\_\_ cm



Perimeter = \_\_\_\_\_ m



Perimeter = \_\_\_\_\_ m



Perimeter = \_\_\_\_\_ cm

**Q2. select the correct answer and fill in the blanks:-**

11 cm,  $2(\text{Length} + \text{Breadth})$ , Perimeter

(1) Perimeter of the square is 44 cm. Find the length of each side in cm.



Side =  cm

(2) Perimeter of Rectangle = \_\_\_\_\_

(3) The sum total of the lengths of all the line segments of a simple closed figure is called its \_\_\_\_\_