

Student's name: _____ Group: _____
Teacher's name: _____ Month: January
Exam total: 15 Correct answers: _____ Final grade: _____
Math exam

Read the questions and choose the correct answer.

1. Look at the school supplies, which is the shortest object?

a. Pen



b. Notebook



c. Sharpener



d. Ruler



Let's compare numbers!

2. 1564 is _____ 1859

a. Greater than

b. Less than

c. Equal to

d. Shorter than

3. 4562 is _____ 4362

a. Greater than

b. Less than

c. Equal to

d. Shorter than

4. Maria has eight dogs; she wants to share five cookies equally with each dog. How many cookies will she need in total? _____ Cookies.

- a. Four
- b. Forty
- c. Four hundred
- d. Eighty-five



5. Four kids are playing soccer; each kid brought three soccer balls to the court. How many soccer balls did they bring in total? _____ balls.

- a. Twelve
- b. Two
- c. One hundred
- d. Forty-three



6. Let's multiply by zeros! What is $4 \times 3 \times 100$?

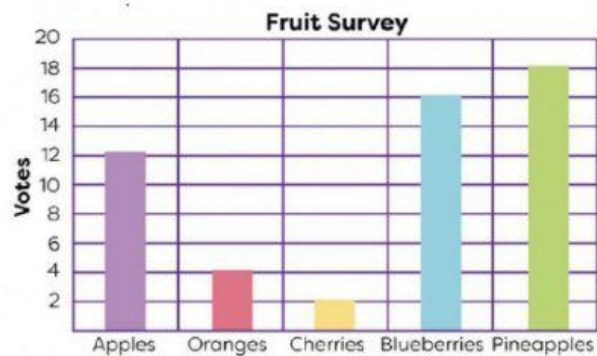
- a. 12000
- b. 1200
- c. 120
- d. 12



7. They show us information in an easy graphic way so we can compare results:

- a. Bar graphs
- b. Multiplication
- c. Ruler
- d. Fruits

Use the information from the bar graph to answer the question below.



8. In a survey with kids about fruits, which one is their favorite?

- a. Apples
- b. Pineapples
- c. Cherries
- d. Blueberries

Look at the clock and choose the correct answer.

9. What time does Oscar have breakfast?

- a. At half past seven
- b. At six thirty-five
- c. At twenty to seven
- d. At quarter to seven



Choose the correct fraction from the given choices.

10. What fraction represents each slice of pizza?

- a. $\frac{1}{3}$
- b. $\frac{2}{3}$
- c. $\frac{1}{2}$
- d. $\frac{1}{4}$

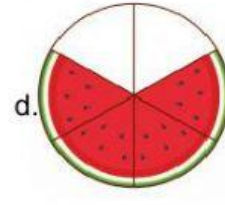
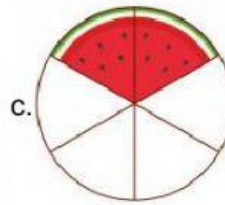

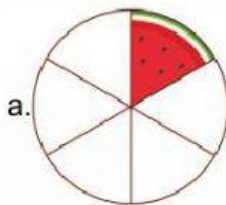


11. Watermelon is Melissa's favorite fruit. What fraction will she eat?

- a. One-half
- b. One-third
- c. One-fourth
- d. Whole



12. What image represents two sixths of watermelon?





13. The students are waiting for the school bus. Who is first in line?

- a. Kiara b. Tom c. David d. Dylan

14. Zoé is the _____ student in line.

- a. First b. Second c. Third d. Fourth

15. The sixth student in line is _____.

- a. Flor b. Luis c. Alan d. Sahid