



CUADRADOS Y CUBOS

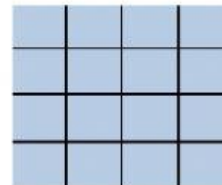
1. Observa la imagen e indica la potencia.



5^2
3^2



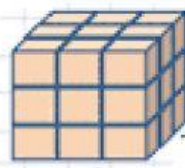
15^2
6^2



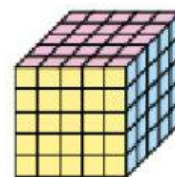
4^2
2^2



1^3
2^3



5^3
3^3



5^3
4^3