

FRAZIONI

COLLEGA OGNI DISEGNO ALLA SUA FRAZIONE



$$\frac{1}{8}$$



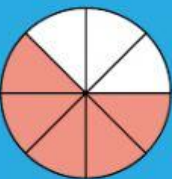
$$\frac{3}{8}$$



$$\frac{1}{4}$$



$$1$$



$$\frac{1}{2}$$


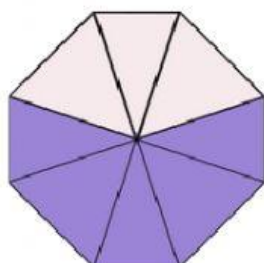
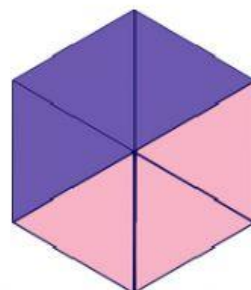
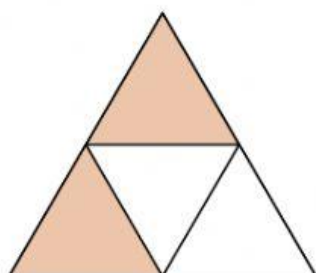
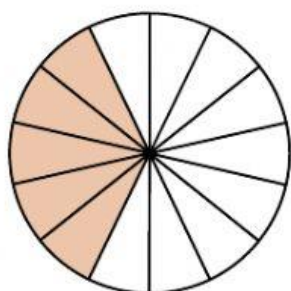
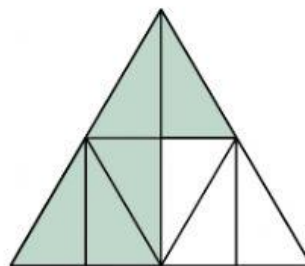
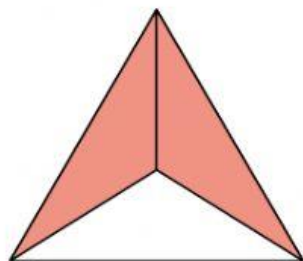



$$\frac{5}{8}$$



$$\frac{7}{8}$$

SCRIVI SOTTO OGNI DISEGNO LE FRAZIONI RELATIVE ALLE PARTI COLORATE





CALCOLI SUL QUADERNO

$$35:4=$$

$$48:7=$$

$$34+67+=$$

$$155+47=$$

$$48-53=$$

$$782-509=$$

$$13 \times 2=$$

$$35 \times 2=$$