



Digital Time – O’Clock

What is the time?

Write digits in the clocks to show the time. The first one has been done for you.




2 o'clock




5 o'clock




10 o'clock



8 o'clock




12 o'clock



3 o'clock




9 o'clock



7 o'clock



1 o'clock



4 o'clock



11 o'clock

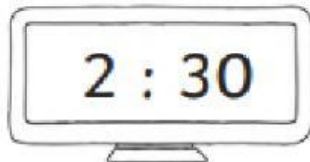


6 o'clock

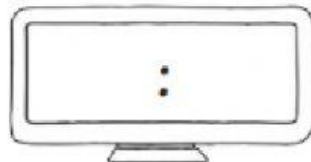
Digital Time - Half Past

What is the time?

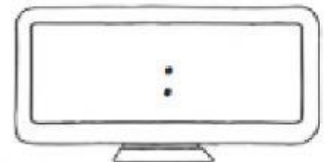
Write digits in the clocks to show the time. The first one has been done for you.



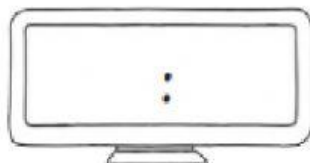
half past 2



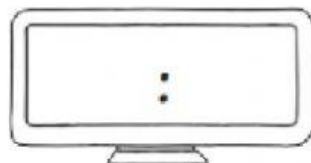
half past 5



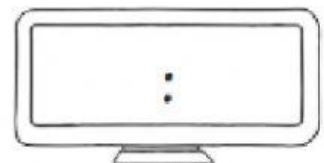
half past 10



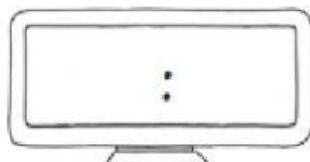
half past 8



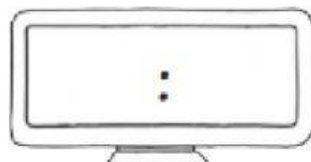
half past 12



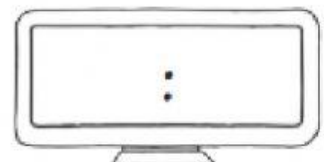
half past 3



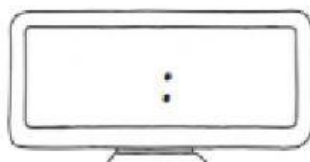
half past 9



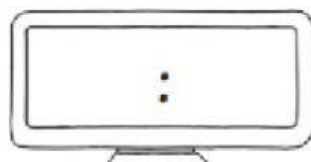
half past 7



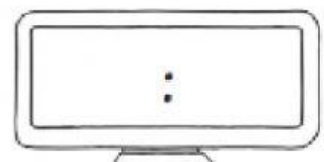
half past 1



half past 4



half past 11



half past 6

Write the following times in words.

1:00 _____

3:30 _____

12:30 _____

9:00 _____

11:00 _____

10:30 _____

8:00 _____