

# WORKSHEET (21.01.2022)

## I. Circle the correct answer

- If ..... rainy, I wear a raincoat.  
A. it's                                      B. there's                                      C. it
- What are they going to do tomorrow? – They're going .....  
A. to riding a bike                      B. to ride a bike                              C. ride a bike
- People should stay away ..... the trees during a thunderstorm.  
A. of    B. from    C. different from
- If it's cold, I should ..... boots and a thick coat.  
A. wear                                      B. wearing                                      C. to wear
- There was water everywhere and they ..... save the people by helicopter.  
A. have to                                      B. had to                                      C. will have to

## II. Look, read and answer the questions



1. What do you do if a tornado comes?

⇒ .....



2. What is the weather going to be like tomorrow?

⇒ .....



3. What are you going to do next Monday?

⇒ .....



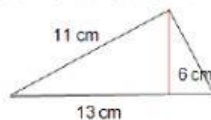
4. What do you do if it's hot?

⇒ .....

## III. Put in order

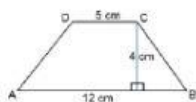
1. it / snows / If /, / wears / she / gloves / boots / and / ./  
⇒ .....
2. Max/ to/ to/ going/ Mexico/ next week/ is/ travel./ /  
⇒ .....
3. next/ party/ have/ Are/ going/ they / to/ a/ weekend/? /  
⇒ .....
4. like/ on/ What/ weather/ going/ be/ to/ the/ is/ Monday/? /  
⇒ .....
5. going/ to/ rainy/ It's/ and/ a/ there's/ be/ flood/ to/ going/ be./ /  
⇒ .....

## IV. Calculate the area of these shapes



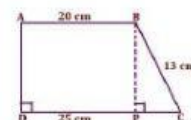
1. What is the area of this triangle?

⇒ .....cm<sup>2</sup>.



3. What is the area of this trapezium?

⇒ ..... cm<sup>2</sup>.



2. What is the area of this trapezium?

⇒ ..... cm<sup>2</sup>.



4. What is the circumference of this circle?

⇒ ..... cm.