

1-2 Look at the table.

Name	Height	Weight	Language
Megan	170 cm	70 kg	Chinese, Japanese English
Thomas	175 cm	65 kg	Thai, English
Daniel	180 cm	65 kg	English, Chinese

1. Which language can everyone speak?

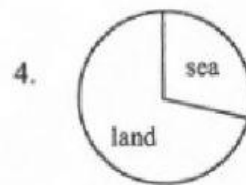
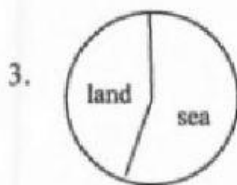
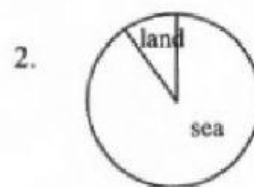
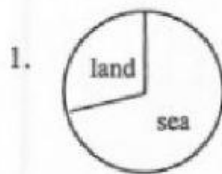
1. Thai
2. English
3. Chinese
4. Japanese

2. Which of the following is correct?

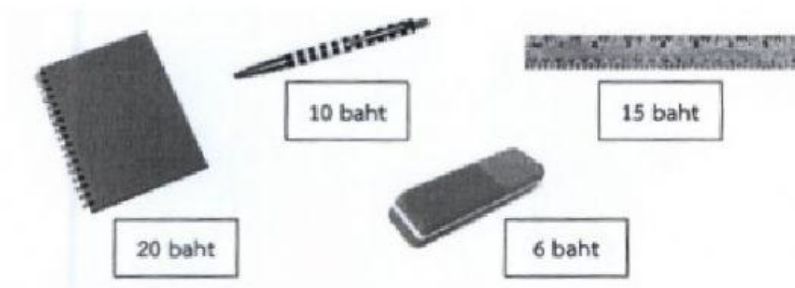
1. Megan is taller than Daniel, but light than Thomas.
2. Thomas is taller than Megan, but lighter than Daniel.
3. Thomas is shorter than Daniel, but heavier than Megan.
4. Megan is shorter than Thomas, but heavier than Daniel.

3. The sea is 71% of the earth's surface while land is 29%.

Which graph is correct?



4-5 Look at the things and their price.



4. You have 40 bath. What can you buy?

- | | |
|----------------------------------|-----------------------------------|
| 1. A notebook and two pens. | 2. Three pens and two rulers. |
| 3. Two rulers and three rubbers. | 4. Four rubbers and one notebook. |

5. Sam buys a pen and a rubber. How much does he pay?

- | | |
|-----------------|---------------|
| 1. Six bath | 2. Ten bath |
| 3. Sixteen bath | 4. Sixty bath |


6. Look at the picture.



Which of the following is correct about the picture?

- | | |
|-----------------------------------|--|
| 1. We go skiing in the winter. | 2. They are walking in the rain. |
| 3. The sky is blue in the summer. | 4. It is nice and warm on a sunny day. |

7. Which sentence is true for the picture?



- | | |
|-----------------------------------|------------------------------------|
| 1. A circle is inside a triangle. | 2. A triangle is inside a circle. |
| 3. A circle is outside a square. | 4. A triangle is outside a square. |

8. Read the sign.



Which of the following is correct according to the sign?

- | | |
|----------------------------------|-------------------------------------|
| 1. You can pay later. | 2. You do not have to pay. |
| 3. You cannot use a credit card. | 4. You should use your credit card. |

9. Look at the sign.



Which of the following is correct about the sign?

1. It is a parking space for bicycles only.
2. It is an area where only bicycles are bought and sold.
3. It is a part of a road that only bicycles are allowed to use.
4. It is a tour to the countryside where everyone rides a bicycle.

10. On October 31, children celebrate Halloween. What do they usually do?

1. They splash water on each other.
2. They send handmade cards to their fathers.
3. They give jasmine flowers to their mother.
4. They dress like ghosts.

Name.....class.....No.....