






Day of the Week	Number of Pineapples sold
Monday	
Tuesday	
Wednesday	
Thursday	
Friday	

Key  = 10 pineapples

- How many pineapples did Betty sell on Monday? _____
- On which two days did she sell the same number of pineapples? Choose the earlier day first.
_____ and _____
- On which day did she sell the least number of pineapples? _____
- On which day did she sell 30 pineapples? _____
- On which day did she sell the most pineapples? _____
- How many pineapples did she sell on Wednesday and Thursday? _____