

Homework 1/18/22

Reading Homework:

1.) What is the meaning of the word **retreat** as used in the sentence below?

The President called for all troops to **retreat** back to their home base.

Retreat: n. 1. An act of going away especially from something difficult, dangerous, or disagreeable 2. Military return from the enemy 3. A place of privacy or safety 4. A period of withdrawal for prayer, meditation, or study

a. 1

b. 2

c. 3

d. 4

2.) What is the meaning of the word **brace** as used in the sentences below?

Then the flight attendant came and told us we needed to land. "It will be hard, so **brace** yourselves. Put your head down. Hold tight."

Brace: v. 1. To make firm or tight 2. To get ready 3. To give life or energy 4. To regain ones courage

a. 1

b. 2

c. 3

d. 4

3.) In the paragraph below, what does the word **burst** mean?

"It doesn't sound like that is the problem," she said. "Your mother is making good food, but you're eating candy and cookies. Do you know how much nutrition there is in those foods? They aren't even on that pyramid. Sugar gives you a **burst** of energy, but that does not last. You need to have a better diet. You need good food to sustain your energy. You need to eat meats, fruits, and vegetables."

- A. To break open into pieces
- B. To suddenly show one's feelings
- C. To come or go suddenly
- D. A sudden release or effort

Writing Homework:

Directions: Finish the sentence "Things I can do to keep peace with others is....". Add details to create a five sentence paragraph.

Math Homework:

Mid-Year Review Assessment Look Alike Problems (Test is January 15, 2022)

1. What is the product of 66 and 45?

a. 2,970	b. 2,740
c. 594	d. 2,570

2. What is the difference between 5,180 and 497?


a. 5,317	b. 4,683
c. 5,677	d. 5,683

3. Solve for the quotient.

$$7 \overline{)348}$$


a. 164	b. 52 R4
c. 49 R5	d. 48 R12

4. The model below is shaded to represent one whole.




Each of the following models is shaded to represent a decimal.

Model 1



Model 2



What is the sum of these two numbers?

a. 0.85

b. 0.7

c. 0.29

d. 0.2

5. What is the difference between 5.24 and 2.31?

a. 3.13

b. 7.55

c. 2.83

d. 2.93

Science Homework:

#18 DRAG THE PLANET NAME TO THE BOX THAT DESCRIBES THAT PLANET.

Mercury	<ul style="list-style-type: none"> • Terrestrial • Is a haven for Life 	<ul style="list-style-type: none"> • Gas planet • Has rings • 5th Planet from the sun
Jupiter		
Earth	<ul style="list-style-type: none"> * Gas Planet * Has rings * 6th Planet from the sun 	<ul style="list-style-type: none"> * Terrestrial * Closest to the sun
Saturn		

#13 DRAG THE PLANETS TO THEIR SPOT ON THE DIAGRAM

MERCURY

EARTH

JUPITER

URANUS

MARS

NEPTUNE

VENUS

SATURN

© Pitto Glow 2019