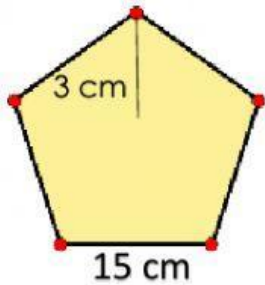
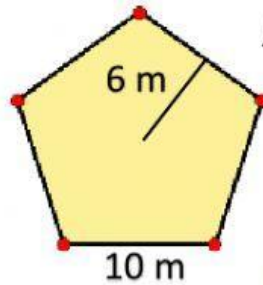


Matemáticas 6° grado primaria

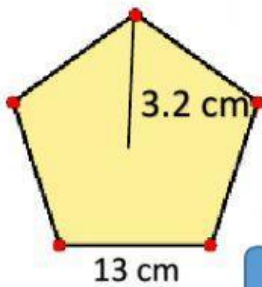
1.- Calcula el área de los siguientes pentágonos



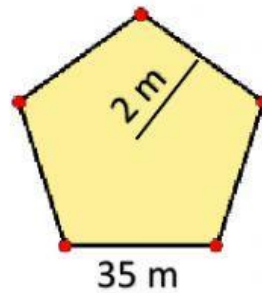
$$A = \frac{p \times a}{2}$$



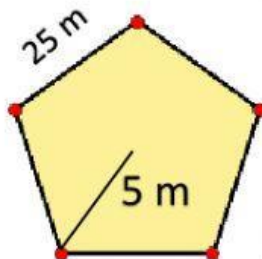
$$A = \frac{p \times a}{2}$$



$$A = \frac{p \times a}{2}$$



$$A = \frac{p \times a}{2}$$



$$A = \frac{p \times a}{2}$$