

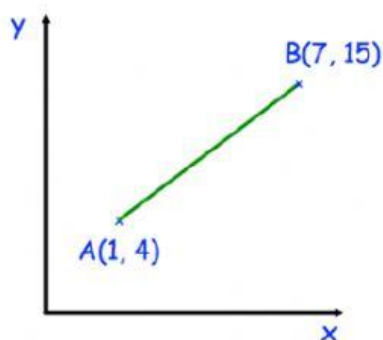
Name: \_\_\_\_\_ Nos: \_\_\_\_\_ Grade: \_\_\_\_\_

### Distance Between Points

Guidance 1. Read each question carefully before you begin answering it.

2. Check your answers seem right from the table given. 3. Always show your workings.

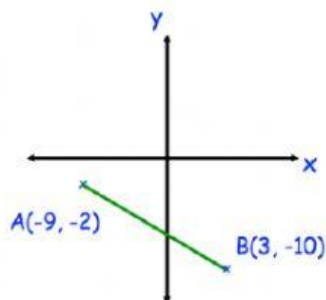
1. Shown below are the points A (1, 4) and B (7, 15)



Calculate the length of the line joining A and B

Answer: \_\_\_\_\_

2. Shown below are the points A (-9, -2) and B (3, -10)



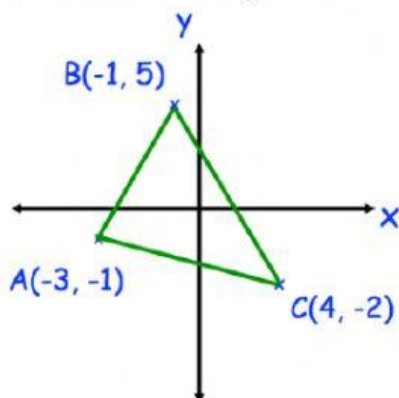
Calculate the length of the line joining A and B.

Answer: \_\_\_\_\_

3. Calculate the distance between the points (-5, 7) and (-3, -2). Answer: \_\_\_\_\_

4. Calculate the distance between the points (-15, 2) and (35, 17). Answer: \_\_\_\_\_

5. Shown below is triangle ABC



Calculate the perimeter of the triangle.

Answer: \_\_\_\_\_

52.2	22	12.53	9.22	$\sqrt{208}$
------	----	-------	------	--------------

Click on finished, get your answer, take pictures and send via **line ID: gpower11**. By **T.OJO**