



SARASAS AFFILIATED SCHOOLS

Midterm Examination

International Education Programme

Semester 2 / 2021

Subject: Mathematics

Year 1

Time: 60 minutes

20 points

First name: _____ Last name: _____ Class: _____ No: _____

The examination consists of 4 parts.

Part 1: Multiple Choice	10 items	10 points
Part 2: Identification	10 items	5 points
Part 3: Solving Problem	5 items	5 points

Part 1	Part 2	Part 3	Total
_____ / 10	_____ / 5	_____ / 5	_____ / 20

Part 1: Multiple choice

5

Directions: Read each question and circle the correct letter.

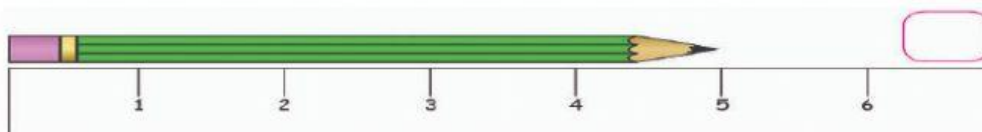
1. It is used to measure the lengths of small objects.

- a. Meter ruler b. Measuring Tape c. Ruler

2. It is a common unit of length that measure shorter objects.

- a. Centimeter b. Meter c. Length

3. What is the length of the pencil?



- a. 5 m b. 5 blocks c. 5 cm

4. Rope B is 15 m long. Rope A is 3 m shorter than Rope B. What is the length of Rope A?



Rope A



Rope B

- a. 18m b. 12m c. 8m


5. It is used to measure the length of clothes and body parts.

- a. Metal measuring tape b. ruler c. Measuring tape

6. In measuring lengths, what does 'm' stands for?

- a. meter b. mother c. meter ruler

7. Alex cut a bamboo into 3 tubes. The first tube was 10cm. The second tube was 7cm and the third was 3cm. What was the original length of the bamboo?



- a. 13cm b. 20cm c. 17cm

8. It is the common unit of weight.

- a. Kilograms b. heavy c. scale

9. Look at the picture and choose the correct answer.

- a. The hamburger is heavier than the apple.
b. The apple is as heavy as the hamburger.
c. The hamburger is lighter than the apple.

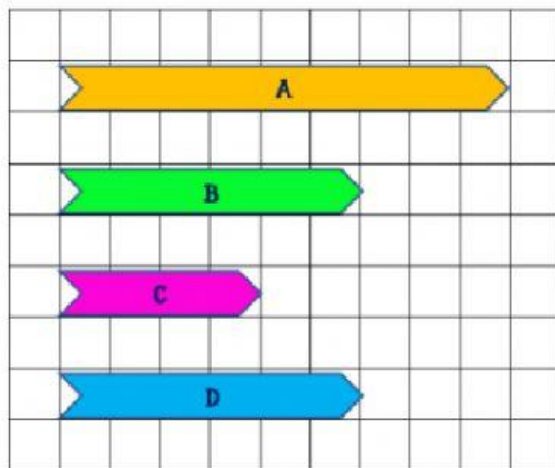


10. Which of the following that weighs 3 kilograms?



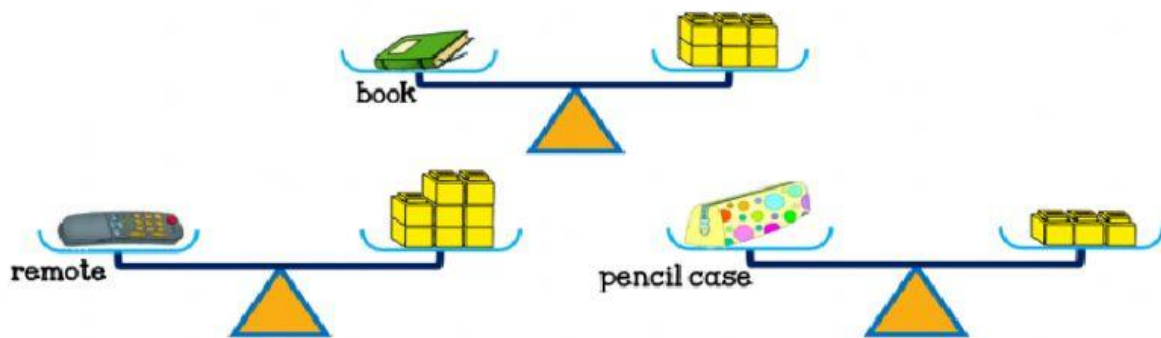
- a. Shrimps b. chicken c. fish

Part 2: Look at the ribbons. Each ☐ stands for 1 unit.



- a) Ribbon A is units long.
 b) Ribbon B is units long.
 c) Ribbon C is units long.
 d) Ribbon is **as long as** Ribbon
 e) Ribbon B is **shorter than** Ribbon
 f) Ribbon is **the longest**.

Part 3: Look at each picture. Each  stands for 1 unit.



Choose the correct answers.

- a) The mass of the book is units.
 b) The mass of remote is units.
 c) The mass of pencil case is units.
 d) The book is **lighter than**
 e) The book is **heavier than**

PREPARED BY: T. GRACE

