





Which values complete the properties of each set of waves?

	number of waves	time (s)	frequency (Hz)
A. 	2	<input data-bbox="941 324 1109 403" type="text" value="?"/>	2
B. 	<input data-bbox="662 436 829 515" type="text" value="?"/>	5	2
C. 	1	2	<input data-bbox="1220 548 1388 627" type="text" value="?"/>
D. 	6	<input data-bbox="941 660 1109 739" type="text" value="?"/>	3

10

1

3

4

0.5

5

2

?

 solve