



SEKOLAH CITRA KASIH

DON BOSCO - PONDOK INDAH

Entrepreneurship Learning with Academic Excellence

MATH / ART

Academic Year 2021/2022 - Semester 2

Solids Worksheet 1

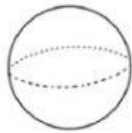
SCORE	SIGNATURE (T)	SIGNATURE (P)

Name : _____
Student's No : _____
Class : 1A / 1B
Day/date : _____

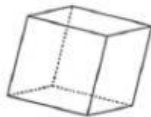
Teacher's comment :

Match the Names

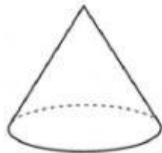
Match the 3D shapes with the objects that resemble them.



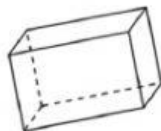
•



•



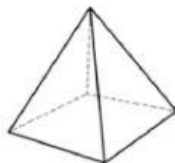
•



•



•



•

• Pyramid

• Cone

• Sphere

• Cylinder

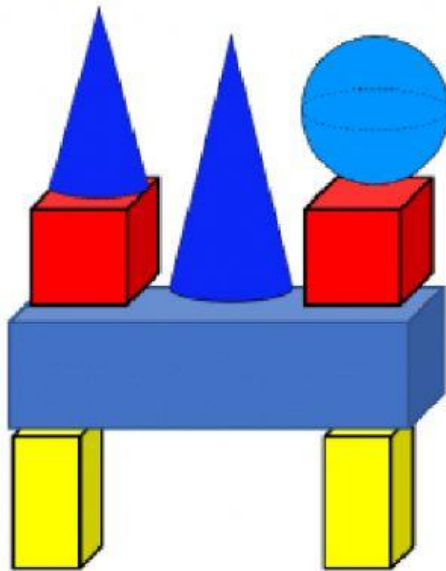
• Cube

• Cuboid

Identify the 3D shapes in the model



I have been building models with 3D shapes.
Complete the sentences to describe each model.

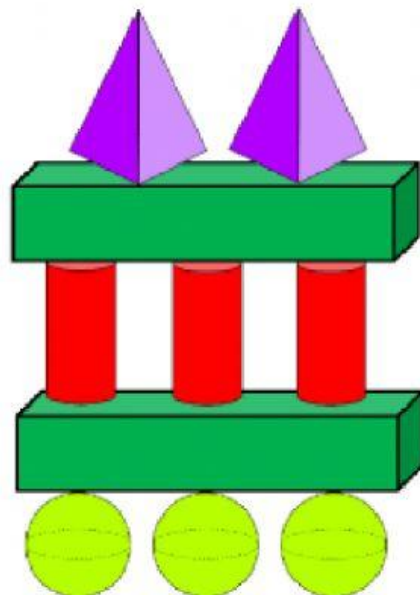


There are cuboids.

There are cubes.

There are cones.

There is sphere.



There are pyramids.

There are cuboids.

There are spheres.

There are cylinders.