

Probability



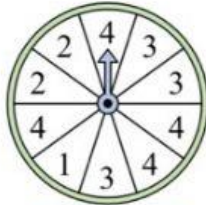
Name.....No.M. 3/.....

Solve each problem.

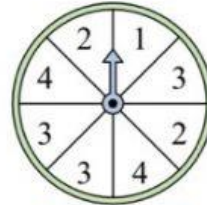
- 1) Which letter is the spinner least likely to land on?



- 2) Which number is the spinner least likely to land on?



- 3) Which number is the spinner most likely to land on?



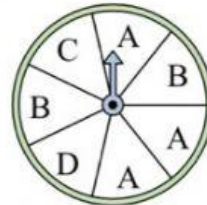
- 4) Which letter is the spinner most likely to land on?



- 5) Which letter is the spinner least likely to land on?



- 6) Which two letters is the spinner equally likely to land on?



- 7) Which number is the spinner most likely to land on?



- 8) Which number is the spinner most likely to land on?



- 9) Which letter is the spinner least likely to land on?



- 10) Which number is the spinner least likely to land on?



- 11) Which letter is the spinner most likely to land on?



- 12) Which two numbers is the spinner equally likely to land on?



