



Solve the word problems.

Here are the measurements of a vegetable patch in an allotment.

- Side 1- 14m
- Side 2- 9m
- Side 3- 14m
- Side 4- 9m



What is the perimeter of the patch?

1.

It is a festive holiday and Leanna wants to put lights around the TV. Look at the measurements.

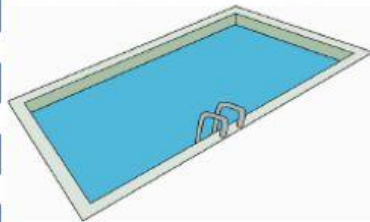
What length of lights does she need?



2.

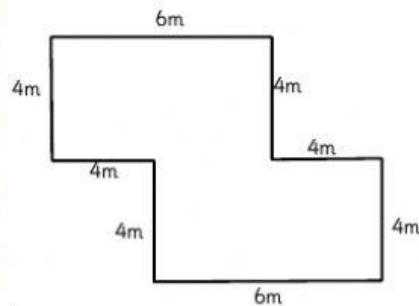
The swimming pool in this house has sides of 25m, 10m, 25m and 10m.

What is the perimeter?



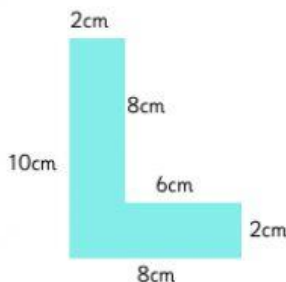
3.

Esin wants to put a fence up for her rabbit enclosure. What is the length of wire she needs to go around the whole perimeter of the enclosure?



4.

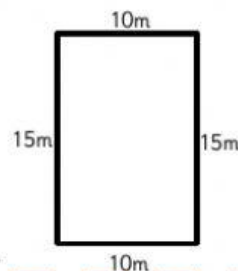
Lee has made a poster with his initial on it. He wants to go around the edge of the letter in red ribbon. Work out the perimeter of the shape so he knows how much ribbon he needs to use.



5.

A school is marking out a basketball court in the playground. They will need a blue line around the rectangle they have marked out.

Use the diagram to work out the length of the blue line they will need to paint.



6.