

# L5L Term 1 Revision Test

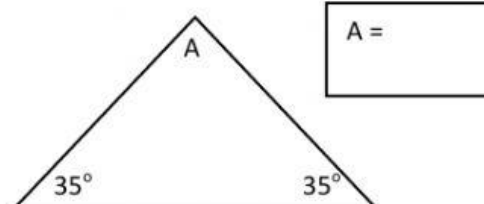
A.) Write the following numbers in words.

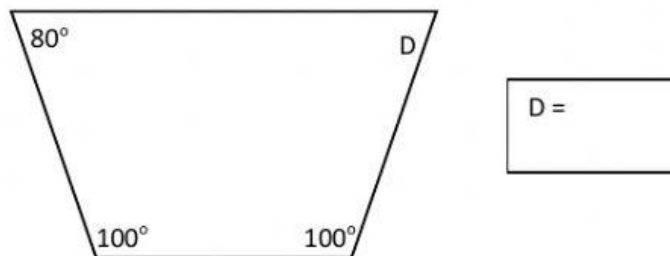
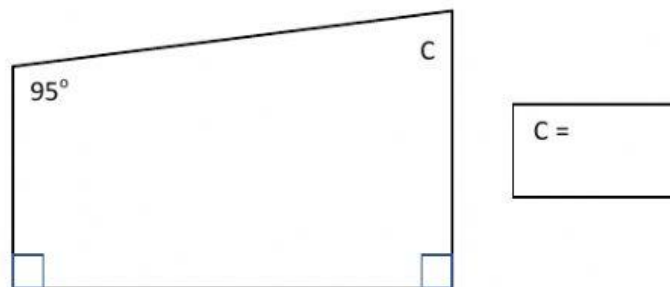
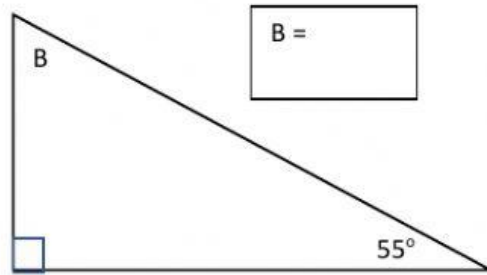
#	Number	Words
1	5,095	
2	8,000,213	
3	45,700	
4	900,000	

B.) Write the following numbers in figures.

#	Number in words	Number in figures
E.g.	Twenty thousand, five hundred.	20,500
1	Three thousand and eighty.	
2	Seven million, sixty thousand, five hundred and thirty.	
3	Twenty-five thousand and twenty-five.	
4	Six hundred and forty-seven thousand, three hundred.	

C.) Find the missing angles provided.

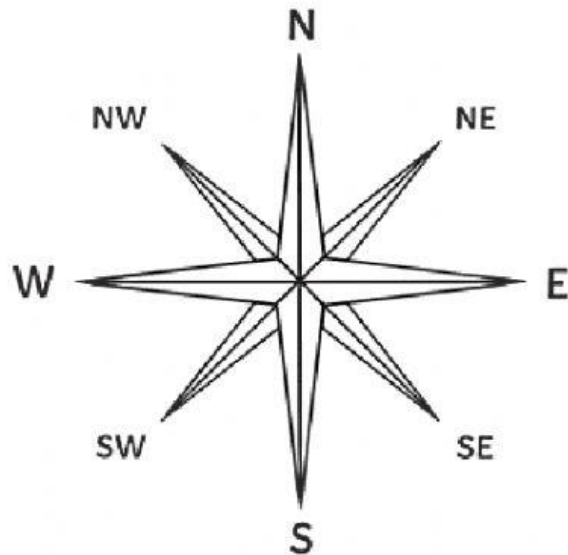




D.) Complete the table below.

#	Roman Numeral	Number
1	XX	
2	II	
3		15
4	XVII	
5		9

E.) Using the compass and seating chart below, FILL IN THE BLANKS to answer the following questions.



Chalkboard			
Sasha	Georgina	Maurice	Toby
Charles	Faith	Jade	Patrick
Window	Door		Teacher's Desk

1. Patrick is \_\_\_\_\_ of the Teacher's desk.
2. The door is \_\_\_\_\_ of the window.
3. Georgina is \_\_\_\_\_ of Charles.
4. Faith is \_\_\_\_\_ of Sasha.
5. Maurice is \_\_\_\_\_ of Toby.

