


# INLAND LANDSCAPES



1. Write the names in the correct place

Summit, valley, plain, plateau, mountain range, foot, slope, hill



2. Identify the different landforms

a. mountain   b. hills   c. -valley-   d. mountain range   e. plain



c



d



e



c



d

### 3. Match the sentences with the definition

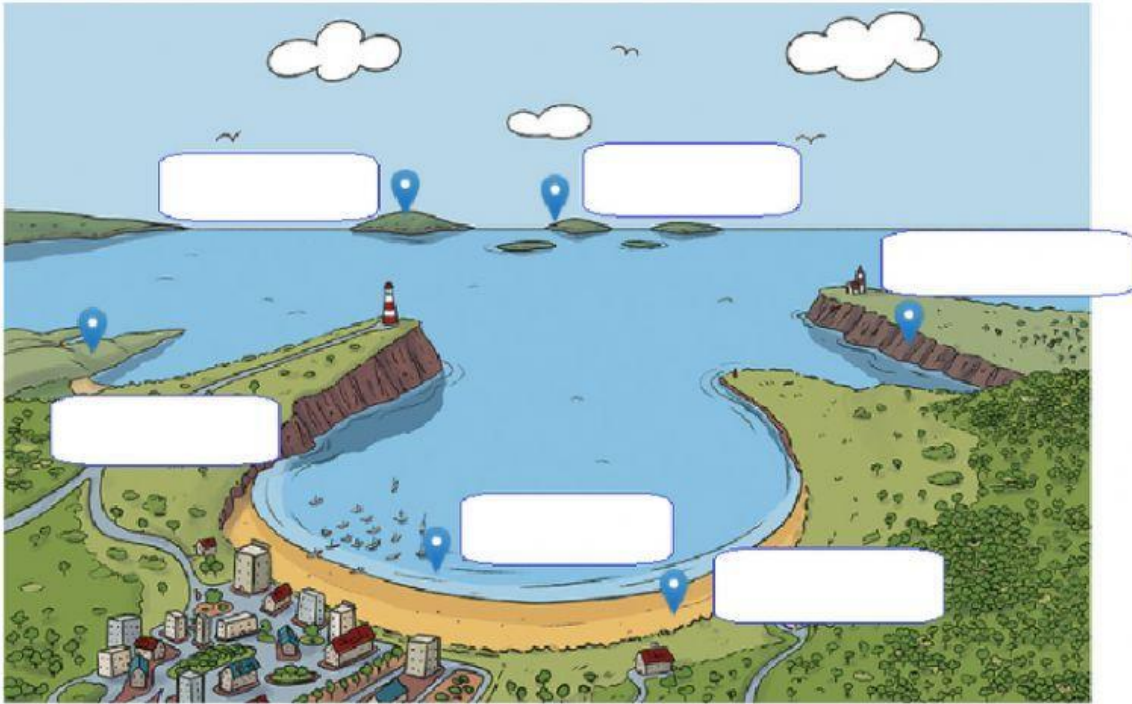
a. A valley	• is similar to a mountain, but not as high.
b. A plain	• is a large, rocky area of land.
c. A plateau	• is a high area of flat land.
d. A hill	• is a low area of land between mountains or hills.
e. A mountain	• is a low area of flat land.

# COASTAL LANDSCAPES



1. Write the names in the correct place

Beach, island, cliff, archipelago, headland, bay



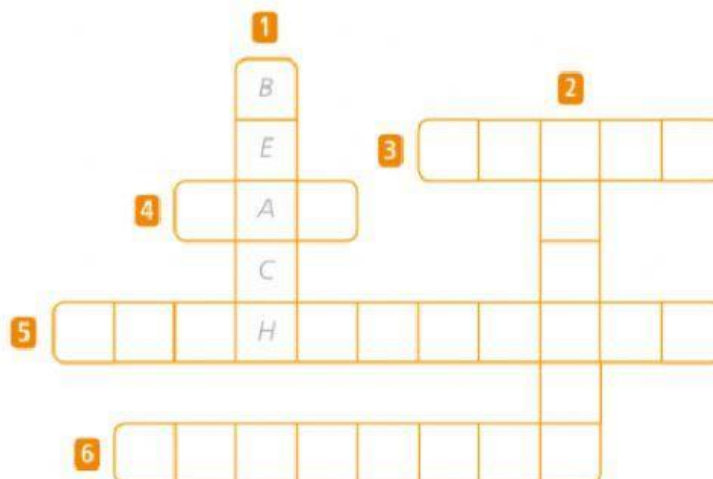
2. Complete the crossword with the definitions

**Down:**

- 1 An area of low, flat land next to the sea, made up of rocks or sand.
- 2 An area of land that is surrounded by water.

**Across:**

- 3 A high wall of rock next to the sea.
- 4 A curved area of land that meets the sea.
- 5 A group of islands.
- 6 A narrow area of land that sticks out into the sea.





# INLAND AND COASTAL LANDSCAPES

## 1. Look and write the words:

Mountain, plain, beach, island, valley, archipelago, cape, plateau

1 

2 

3 

4 

5 

8 

6 

7 

F	B	P	L	A	T	E	A	U	O	B
I	S	L	A	N	D	G	G	Y	I	G
D	F	G	B	N	V	C	A	P	E	N
V	C	X	Z	A	Q	W	R	L	T	D
A	R	C	H	I	P	E	L	A	G	O
L	H	K	X	A	S	X	C	I	S	P
L	M	O	U	N	T	A	I	N	T	Y
E	X	Z	S	D	F	C	B	N	J	P
Y	R	T	B	E	A	C	H	P	Ñ	L

## 2. Complete the table about landscapes

inland	coastal	
<input style="width: 100%;" type="text"/>	<input style="width: 100%;" type="text"/>	lake
<input style="width: 100%;" type="text"/>	<input style="width: 100%;" type="text"/>	mountain range
<input style="width: 100%;" type="text"/>	<input style="width: 100%;" type="text"/>	cliff
<input style="width: 100%;" type="text"/>	<input style="width: 100%;" type="text"/>	plain
<input style="width: 100%;" type="text"/>	<input style="width: 100%;" type="text"/>	plateau
<input style="width: 100%;" type="text"/>	<input style="width: 100%;" type="text"/>	archipelago
<input style="width: 100%;" type="text"/>	<input style="width: 100%;" type="text"/>	island
<input style="width: 100%;" type="text"/>	<input style="width: 100%;" type="text"/>	cape
<input style="width: 100%;" type="text"/>	<input style="width: 100%;" type="text"/>	valley