


AREA AND PERIMETER WORKSHEET

Write the area and perimeter of each figure

Area = length x breadth

Perimeter
= 2 x (length + breadth)
or
= length + breadth + length + breadth

1)



AREA = _____ sq.cm

PERIMETER = _____ cm

2)



AREA = _____ sq.cm

PERIMETER = _____ cm

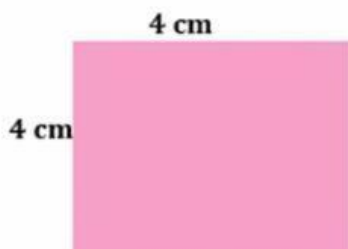
3)



AREA = _____ sq.cm

PERIMETER = _____ cm


4)



AREA = _____ sq.cm

PERIMETER = _____ cm

5)



AREA = _____ sq.cm

PERIMETER = _____ cm