

Subject Math Subject code Class P.2/ 1-4

Number of questions 21 Points 21

Directions:

1. Colour in your choice of answer.

Subject Math**Subject code Class P.2/1-4**

1 – 7 Money

1. How much money is there altogether?



a) ฿ 36

b) ฿ 26

c) ฿ 16

2. How much money is there altogether?



a) ฿ 166

b) ฿ 120

c) ฿ 156

3. Count the money.



a) 410 baht

b) 140 baht

c) 141 baht

4. 600 satang is the same as ?

a) 60 baht

b) 6 baht

c) 3 baht

5. 7 baht 75 satang is the same as ?

a) 725 satang

b) 7,750 satang

c) 775 satang

6. ฿ 4. 25 + ฿ 7. 50 = _____?

a) ฿ 11.75

b) ฿ 11. 00

c) ฿ 12. 75

7. ฿ 50. 00 – ฿ 25. 00 = _____?

a) ฿ 35. 00

b) ฿ 25. 00

c) ฿ 15. 00

Subject Math

Subject code Class P.2/1-4

8 – 14 Fractions

8. Which fraction is the **largest**?

a) $\frac{3}{7}$

b) $\frac{2}{7}$

c) $\frac{5}{7}$

9. Which fraction is the **smallest**?

a) $\frac{9}{9}$

b) $\frac{4}{9}$

c) $\frac{5}{9}$

10. What fraction of the circle is shaded?



a) $\frac{5}{5}$

b) $\frac{2}{5}$

c) $\frac{3}{5}$

11. What fraction of the circle is shaded?



a) $\frac{7}{8}$

b) $\frac{3}{8}$

c) $\frac{5}{8}$

12. Which figure shows the fraction $\frac{2}{6}$?

a)



b)



c)

13. Which fraction is the **largest**?

a) $\frac{1}{2}$

b) $\frac{1}{8}$

c) $\frac{1}{3}$

14. $\frac{5}{6}$ is _____ $\frac{2}{6}$.

a) smaller than

b) larger than

c) equal to

Subject Math

Subject code Class P.2/1-3

15 – 21 Time



15. What is the time on the clock?

- a) 12 o'clock b) 4 o'clock c) 2 o'clock



16. What time is on the clock?

- a) 2: 50 b) 1: 50 c) 2: 45



17. What is the time on the clock?

- a) 9: 25 b) 5: 45 c) 9: 20



18. What time is on the clock?

- a) 2: 35 b) 7: 15 c) 7: 10



19. What time is on the clock?

- a) 3 o'clock b) half past 3 c) 4 o'clock

20. Which of these is am?

- a) Wake up b) Go to bed c) Go home from school

21. Which of these is pm?

- a) Go to school b) Go to bed c) Eat breakfast

Pre-Final Examination	Academic year: 2021	Semester: 2
Subject: Math	Subject code:	Class: P.2/1-4
Number of questions: 3	Points: 9	

Name: _____ Nickname: _____ Number: _____ Class: __/__

Directions:

1. Try to answer all the questions.
2. If you finish early, check your answers again.
3. Do not cheat!

Q 1. Money.

Convert into satang.

1 Baht = 100 satang

3 Baht = _____ satang

11 Baht = _____ satang

3 baht 25 satang = _____ satang

Convert into baht.

300 satang = 3 baht

400 satang = _____ baht

150 satang = _____ baht _____ satang

675 satang = _____ baht _____ satang

Q 2. Fractions

Page 2

Match the fraction with its picture.



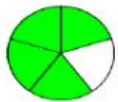
$\frac{3}{5}$



$\frac{4}{5}$



$\frac{7}{9}$



$\frac{1}{4}$









$\frac{4}{9}$



$\frac{2}{6}$

Q 3. Time Write the time or draw the hands on the clock.

 _____	 _____	 _____
 2:30	 5:15	 12:35