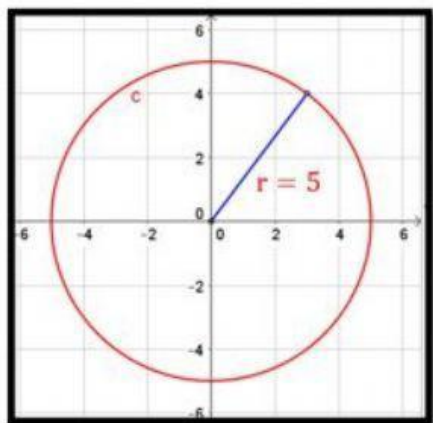
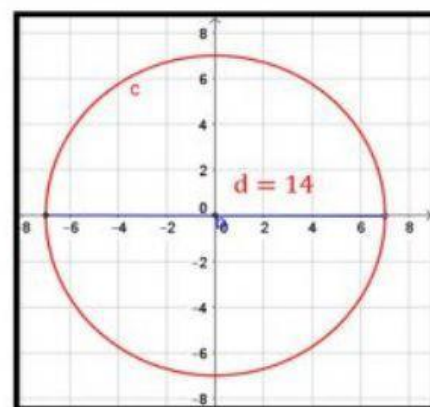


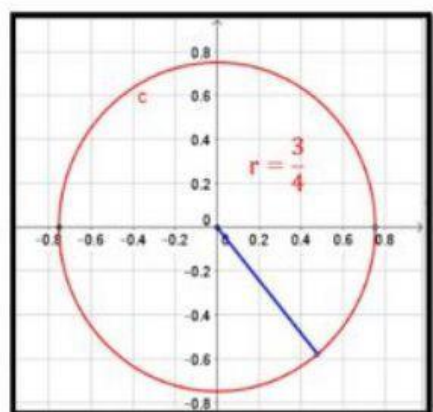
Observe las siguientes gráficas y una con líneas a su respectiva ecuación



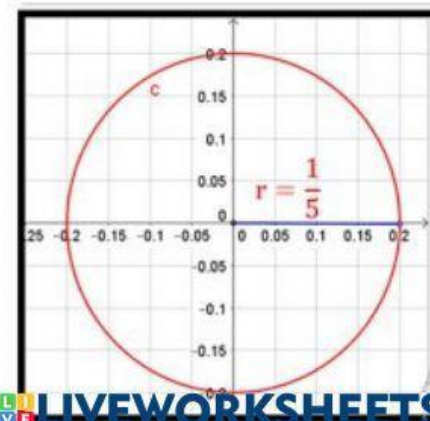
a) $x^2 + y^2 = 25$



b) $x^2 + y^2 = \frac{1}{25}$



c) $x^2 + y^2 = \frac{9}{16}$



d) $x^2 + y^2 = (7)^2$