

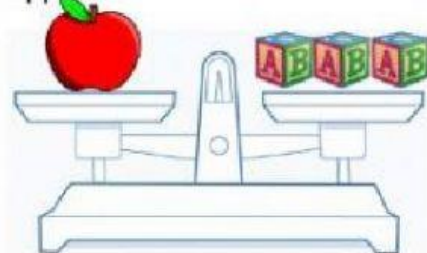


Look at the pictures and answer the questions.


lemon



apple



banana



cabbage



3

2

3

6

a) How much does the lemon weigh? blocks

b) How much does the apple weigh? blocks

c) How much does the banana weigh? blocks

d) How much does the cabbage weigh? blocks

Arrange from **heaviest** to **lightest**.



Heaviest



lightest

Look at the pictures given below and fill in the blanks accordingly.

1



Raju is than Reena.
(heavier/lighter)

2




Jug is than Pot.
(heavier/lighter)

3



Wood trunks is than
Drum.
(heavier/lighter)

4



Watermelon is than
pineapple.
(heavier/lighter)