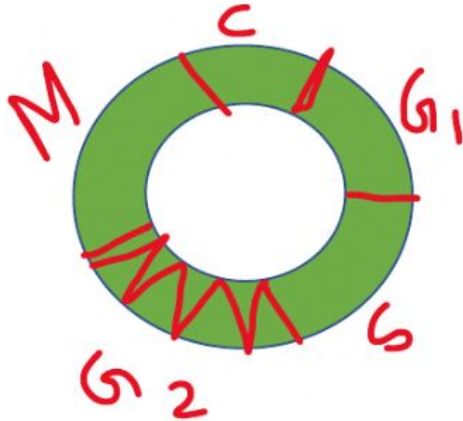


## Analyzing data work sheet

Read the questions carefully before answering.

1. Look at the diagram carefully.

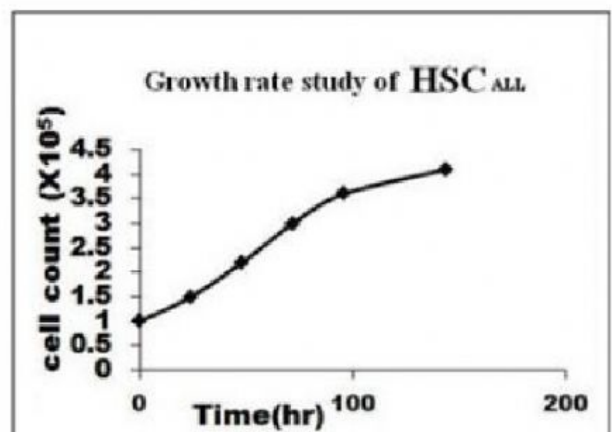
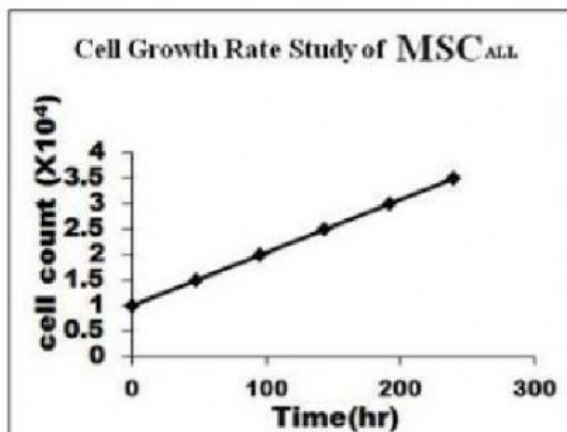


The cell cycle didn't happen for a cell because some errors in one of the stages. In which stage the error is?

2. Ahmmed watered his beetroot plant with salt water. The plant started to wilt. What might be the reason for that.



3. Below you can see a graph on rate of growth of cells on 2 different nutrient media.



A. Which one of the graphs shows steady growth rate?

B. Which one of the graphs shows slow growth rate of cells?