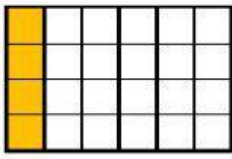
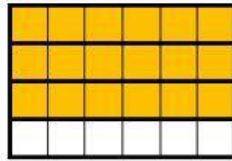
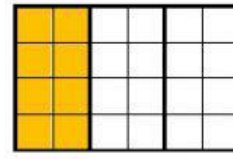


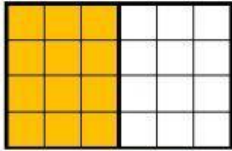
FRACCIONES I


1.- Elige la fracción que representa a la parte coloreada de cada figura

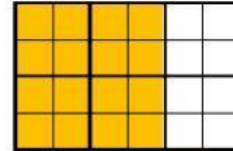












2.- Ordena las anteriores fracciones de mayor a menor

--	--	--	--	--	--

3.- Escribe el nombre de cada fracción

$$\frac{3}{5}$$

$$\frac{1}{2}$$

$$\frac{2}{7}$$

$$\frac{6}{10}$$

$$\frac{5}{12}$$

$$\frac{9}{18}$$