

Math Evaluation

2nd Bimester

A. Use the number line to tell the elapsed time.

Josh needs to keep a journal for school that tells how long certain events took. He remembers when he started and finished each one but isn't sure how long they took. Help him figure out how long each took using the number-lines.

- Football Game: 3:30 pm – 4:30 pm

- Jessica's Birthday Party: 2:00 pm – 3:25 pm

- Day of School: 8:00 am – 12:00 pm

- Drive to Grandparents: 1:00 pm – 1:55 pm

B. Tell the time. Choose the right answer



4:10

4:30

4:00



1:25

1:10

1:35



5:20

5:45

5:00



5:00

5:10

5:35



6:05

6:10

6:35








11:25

11:10

11:15

C. Write the time on the space provided.

		It's a quarter past six.
		It's a quarter to five.
		It's half past five.
		It's ten to four.
		It's twenty five to twelve.