

NAME: _____

GRADE: _____

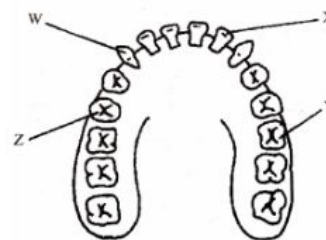
DATE: _____

TOPIC: Types of Teeth

INSTRUCTIONS: For each question, there are four suggested answers- A, B, C and D. Read each question and the suggested answers carefully. When you have selected an answer to the question. Circle the letter of the answer you have selected.

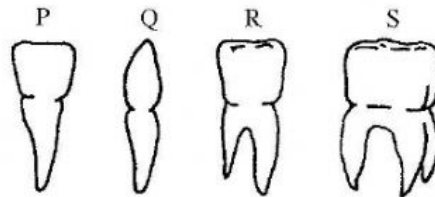
- 1 The diagram shows the location of four different types of teeth in the human upper jaw. Which letters point to the incisor and molar teeth?

- A. W is an canine and X is a incisor.
- B. X is an incisor and Y is a canine.
- C. Y is an molar and Z is a premolar
- D. Z is an premolar and W is a molar



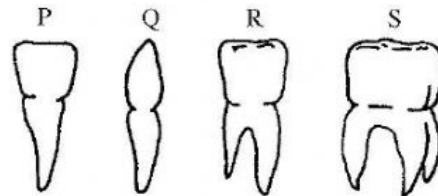
- 2 What is the name for tooth R?

- A. Incisor
- B. Canine
- C. Premolar
- D. Molar



3. What is the function of tooth P?

- A. Biting food into small pieces.
- B. Tearing food.
- C. Crushing food.
- D. Grinding food up.



4. How many of tooth Q are found in the human mouth?

- A. 4
- B. 8
- C. 12
- D. 16