

Name: _____

Mark: _____


3. Use Models to Multiply

D. Homework


In 9 – 10, choose a model correct to find each product.

9. 3×16

A.



B.



$$\underline{\quad} \times \underline{\quad} + \underline{\quad} \times \underline{\quad}$$

$$= \underline{\hspace{2cm}}$$


$$= \underline{\hspace{2cm}}$$

10. 2×35

A.



B.



$$\underline{\quad} \times \underline{\quad} + \underline{\quad} \times \underline{\quad}$$

$$= \underline{\hspace{2cm}}$$

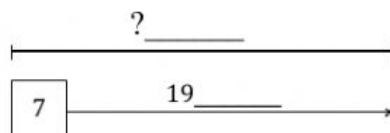
$$= \underline{\hspace{2cm}}$$

In 11 – 13, look at the table and answer the questions.

11. Bob works 7 hours each day.

How many hours does he work in April?

Bar diagram:



Days Worked in April

Employee	Days Worked
Bob	19
Josh	25
Marvin	13

12. Josh works 8 hours each day. How many hours does he work in April?

Complete bar diagram:



13. Marvin works 5 hours each day. How many hours does he work in April?

Complete bar diagram:

