


Name: _____

Date: _____

Measuring Mass in Grams


1 Complete.



The mass of the stapler is _____ g.


2 Complete.

(a)



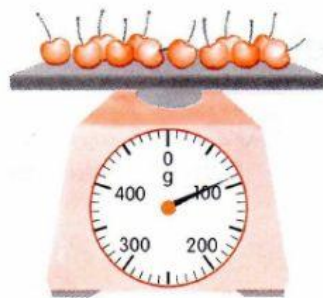
The mass of the correction tape is _____ g.

(b)




The mass of the bottle of salt is _____ g.

(c)




The mass of the cherries is _____ g.

(d)



The mass of the orange is _____ g.

3 Look at the picture.



What could the mass of each box be?

Are there other answers?
Why do you think so?



How do you do your worksheet?

(write A, B, or C)



A. I can do the worksheet
by myself



B. I need a little help



C. I need a lot of help