


Name: _____

Date: _____

1 Complete.


(a) The mass of the stack of papers is _____ kg.



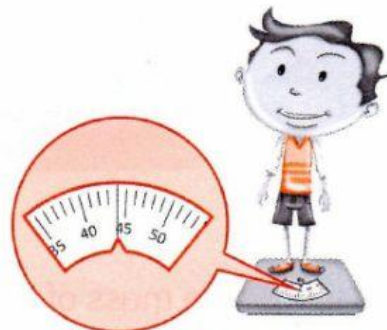
(b) The mass of the book is _____ kg.



(c) The mass of the cabbage is _____ kg.




(d) The mass of the boy is _____ kg.




2 Complete with "more than" or "less than".

(a)



The mass of the crabs is
_____ 1 kg.

(b)



The mass of the apples is
_____ 1 kg.

3 Look at the list below.
Guess the mass of each item.
Then check your answer with a balance.
Tick (✓) the correct boxes.

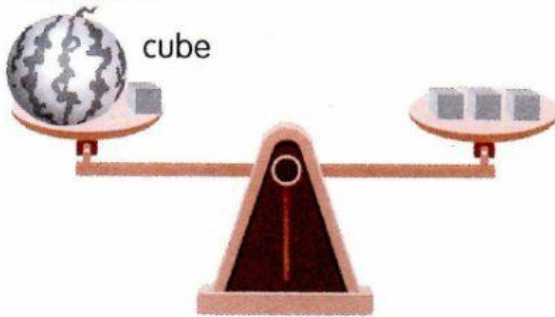
Item	Guess		Check	
	less than 1 kg	more than 1 kg	less than 1 kg	more than 1 kg
my school bag with books				
my Pupil's Book				
my pencil case with stationery				

How do you use a balance to check your answer?




4 Look at the picture.

watermelon



watermelon



What is the mass of a cube?
Why do you say so?

How many cubes have the same mass as the watermelon?

A cartoon owl character with large orange eyes and a small antenna is shown at the bottom right of the box. It has a speech bubble above it containing the question: "How many cubes have the same mass as the watermelon?"