

SEMESTER 1 TEST

GRADE 1 MATH

School name: Lam Son

Student name: _____

Class: _____

I. Count and choose the correct number (4 points):

Example:



A. four

B. five

C. six

1.




A. one

B. two

C. three

2.



A. five


B. six

C. seven

SEMESTER 1 TEST

GRADE 1 MATH

3.



- A. eight
- B. nine
- C. ten

4.

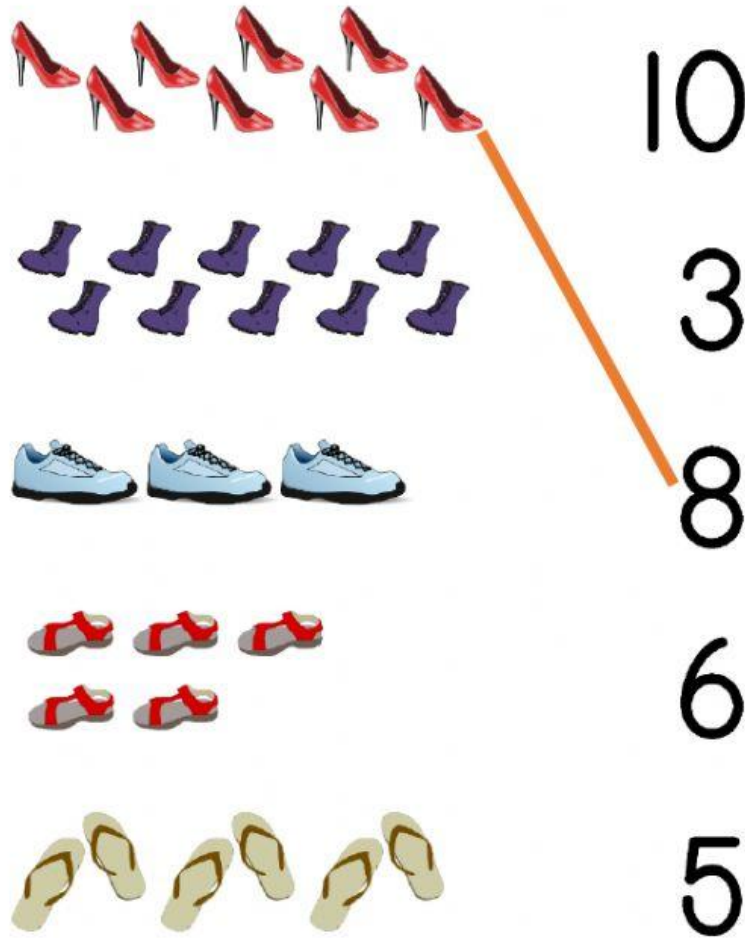


- A. seven
- B. eight
- C. nine

SEMESTER 1 TEST

GRADE 1 MATH

II. Count the objects and match with the correct number (4 points).



Count the objects and match with the correct number:

- 8 red high-heeled shoes
- 10 purple boots
- 3 blue sneakers
- 5 red sandals
- 6 yellow flip-flops

Numbers to match: 10, 3, 8, 6, 5


An orange line connects the 8 red high-heeled shoes to the number 8.

III. Compare and choose the correct answer (2 points)

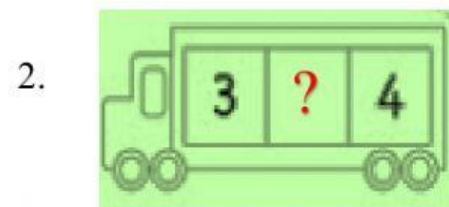
Example:



- A. $>$
- B. $<$
- C. $=$



- A. $>$
- B. $<$
- C. $=$



- A. $<$
- B. $=$
- C. $>$