

Shorouq Al Marefa International School  
Academic Year 2021/2022

Name: \_\_\_\_\_ Grade 2  
Math  
Teacher Maribel

Telling Time Worksheet  
Topic 8 Lesson 7

Instructions: Read the statements and click AM or PM.

1. Mohan has cereal for breakfast.



AM

PM

2. I play football in the evening.



AM

PM

3. We watched a scary movie last night.



AM

PM

4. I got to school early every morning.



AM

PM













Name: \_\_\_\_\_ Grade 2  
 Math  
 Teacher Maribel

## Telling Time Worksheet

### Topic 8 Lesson 7

Name \_\_\_\_\_

Look at the picture and the clock. What time did this happen?  
 Write the time and circle either AM or PM.

					
<p>Ben soaked up some sun at the beach at ____ AM PM.</p>	<p>Jeff flew his kite after school today at ____ AM PM.</p>	<p>Sarah and Sam washed up for dinner today at ____ AM PM.</p>			
					
<p>David was sound asleep today at ____ AM PM.</p>	<p>Lana had riding lessons today at ____ AM PM.</p>	<p>Maya gathered eggs before school at ____ AM PM.</p>			

© 2<sup>nd</sup> Grade Snickendoodles 2014