

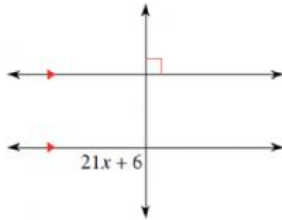
Name: .....

Class: .....

**1** Identify each pair of angles as corresponding, alternate interior, alternate exterior, or consecutive interior.

Level-3

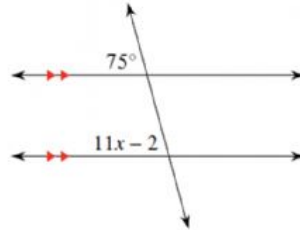
**2** Solve for  $x$



**1**

**2**

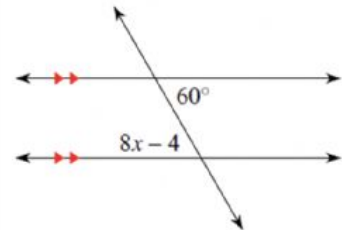
**2** Solve for  $x$



**1**

**2**

**2** Solve for  $x$



**1**

**2**