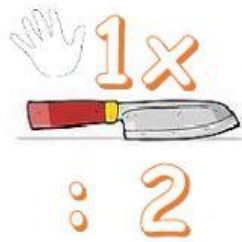
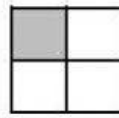

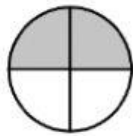
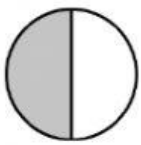


Les fractions


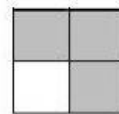

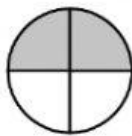
Rappelle-toi



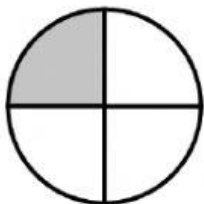
Colorie les dessins qui représentent $\frac{1}{2}$



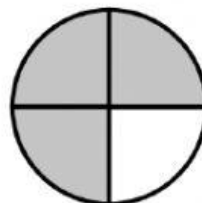
Colorie les dessins qui représentent $\frac{1}{4}$



Ecris la bonne fraction pour chaque dessin.



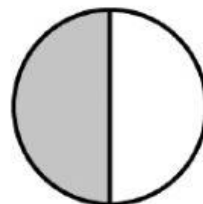
$\frac{1}{4}$



—



—



—