

Name: _____

Date: _____ Grade: _____

Perimeter Review

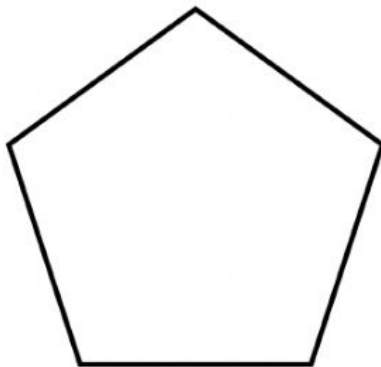
Calculate the perimeter of the following shapes. Pay attention to the measurements and the units of measurements.

1. All of the sides of this square measure 7 cm.



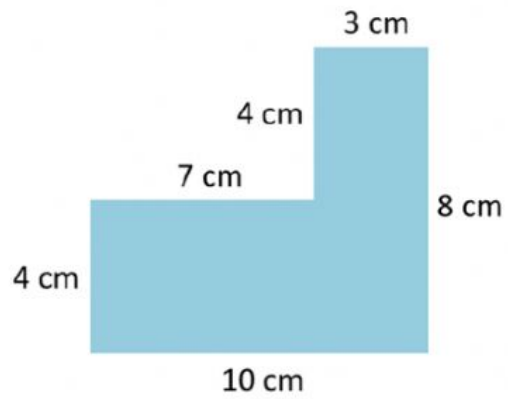
Ans: _____

3. All the sides of this pentagon measures 6 cm.



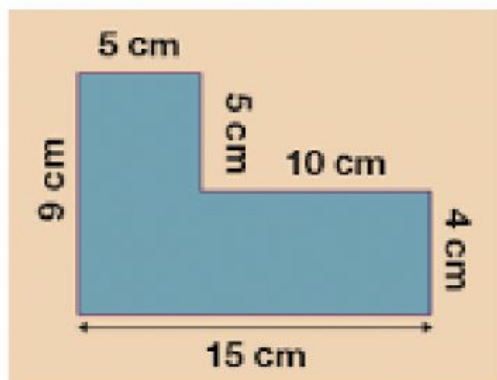
Ans: _____

3. Remember to add ALL the sides



Ans: _____

4.



Ans: _____