

Reading Homework:

1. Read the following paragraph.

Evie carefully opened the door and peered out. Branches and leaves covered the ground. She could see a few pieces of siding and shingles laying in the grass. A large tree had fallen as well, luckily it had missed the house.

Based on the paragraph, which of the following are true? Select **two** correct answers.

It would take a lot of time to clean up the yard.

A bad storm had created a mess in Evie's yard.

Evie was injured during the storm.

Evie was nervous about opening the door and going outside.

2. Read the following paragraph.

Harriet awoke suddenly. The light was streaming through the window. "Oh no!" she cried. She leapt out of bed, threw on some clothes, and brushed her teeth. As she ran down the stairs, she could hear the motor of a large vehicle driving past her door. "I'm too late," she sighed and sat down on the bottom step.

Based on the paragraph, which of the following are true? Select **two** correct answers.

Harriet would not make it to school on time.
Harriet thought it was Saturday.
Harriet was frustrated about waking up late.
Harriet was not feeling well and had slept in.

3. Read the following paragraph.

Mary Bethune had a dream. She wanted to start a school for African American children. She had a teaching degree, but she had no building. Still Mary had hope. She received donations. At last her school opened in 1904. Through her hard work, the school was a big success. It became known as Bethune-Cookman College. The school, located in Florida, is still open today.

Based on the passage, the reader can tell that -

- A. Mary Bethune had a lot of money.
- B. Mary Bethune was a determined woman.
- C. Mary Bethune's dream did not come true.
- D. Mary Bethune's school has many students.

Writing Homework:

Directions: Choose the word that best completes the sentence.

- 1.) Danny looks happy/happily today.
- 2.) You always speak so nice/nicely to everyone.
- 3.) She got a new laptop for free/freely.
- 4.) The pirates had to dig deep/deeply to find the treasure.
- 5.) I waited nervous/nervously in the waiting room.

Math Homework:

1. Solve for the product of 97 and 34.

a. 639

b. 3,078

c. 679

d. 3,298

2. Solve for the quotient of 268 and 9.

a. 28 R36

b. 28

c. 29 R7

d. 29

3. Tom is making his grocery list for his weekend cookout. He needs to purchase a case of hot dogs for \$15.96, a box of hamburgers for \$23.99, and two boxes of chips for \$8.98 each. If Tom pays with \$75, how much change will he receive back?


a. \$48.93

b. \$57.91


c. \$17.09

d. \$26.07

4. This model is shaded to represent 1 whole.



The model shown is shaded to represent part of 1.



Which decimal best represents the shaded part of this model?

a. 0.92	b. 0.06
c. 0.95	d. 0.98

Virginia Studies:

Move the box to complete the cause-and-effect chart.



African men, women, and children were brought to the colony and enslaved to work on the plantations.

The colony's cotton farmers used enslaved labor to make money and increase their resources.

The colony's tobacco farmers used enslaved labor to make money and increase their resources.

© Myra Twiss

What is an example of architecture that reflected different cultures in the Virginia colony?



a factory



a barn



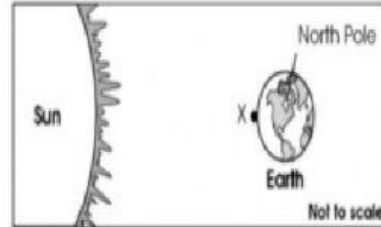
a bridge

© Myra Twiss

Science Homework:

3. It is currently daytime at point X shown on Earth.

Earth and Sun



Which statement explains why it will be nighttime at point X after 12 hours?

- a. Earth is tilted on its axis
- b. Earth has a round shape
- c. Earth orbits the sun
- d. Earth rotates on its axis

2. The largest, most massive, object in our solar system is--

- a. the sun
- b. the moon
- c. Jupiter
- d. Earth