

Homework 1/3/22

Reading Homework:

Night Eyes

by Susan Alton Schmeltz

1. Beyond our campfire
2. in the dark
3. night owls hoot and
4. stray dogs bark
5. The night world teems
6. with prying eyes
7. so don't tell me
8. they're fireflies
9. Beyond our campfire
10. cloaked in black
11. a million eyes
12. are blinking back
13. So I won't sleep,
14. can't close my eyes,
15. I'm watching for
16. the sun to rise.



1. The reader can infer that the speaker of the poem feels -

- A. tired
- B. cold
- C. nervous
- D. Lonely

Directions: Select the **two** correct answers.

2. Based on the poem, which words describe the setting?

dark	outdoors	wooded
indoors	morning	city

3. Based on the details in the poem, the reader can conclude that the speaker most likely believes -

- A. people should not be afraid of the dark.
- B. night is a relaxing part of the day.
- C. something is watching her in the dark.
- D. camping is an enjoyable hobby.

Writing Homework:

Directions: Choose the word that best completes the sentence.

- 1.) The bed is very soft/softly so I can sleep very well.
- 2.) He can play sports good/well because he is strong.
- 3.) The homework was easy/easily and I finished it fast.
- 4.) Please walk quiet/quietly because Mom is sleeping.
- 5.) My friends are angry/angrily that I didn't help them.

Math Homework:

1. Solve for the product of 58 and 27.

a. 1,558	b. 1,566
c. 1,567	d. 1,574

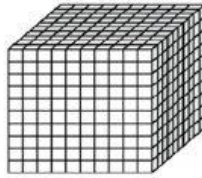
2. Solve for the quotient of 63 and 5

a. 10 R13	b. 11 R8
c. 12 R5	d. 12 R3


3. Mary went to the grocery store after work. She purchased \$36.72 worth of groceries, and paid with a \$50 bill. How much change did Mary receive back from the cashier?

a. \$86.72	b. \$37.22
c. \$13.28	d. \$36.22

4. This model represents the number one.



Which number does this model represent?



a. 0.156	b. 1.56
c. 0.0168	d. 156

Virginia Studies:

Move the correct term to the box to complete the dictionary entry.

(n): a crop that is grown to sell for money rather than for use by the growers

credit crop

money crop

cash crop

© Allways Together

What industry was the main source of wealth in colonial Virginia?

construction

agriculture

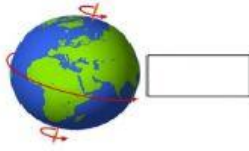
banking

shipbuilding

© Allways Together

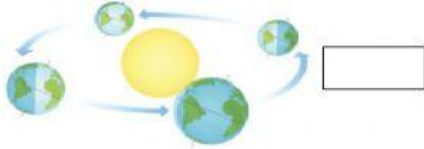
Science Homework:

1. Drag the label to the correct diagram.



revolution

rotation



#2 THE IMAGINARY LINE THAT PLANETS ROTATE ON IS CALLED WHAT?

A diagram of the Earth with a dashed line passing through its center from top to bottom, representing the axis of rotation. The Earth is shown with a curved arrow around this axis, indicating rotation.

REVOLUTION
AXLE

ROTATION
AXIS

© Photo Disc 2019