

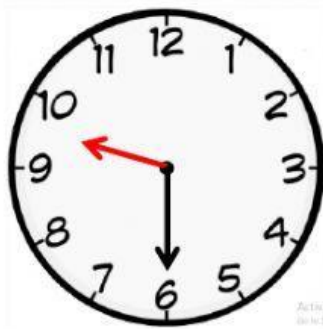
Name : \_\_\_\_\_

Primary Three

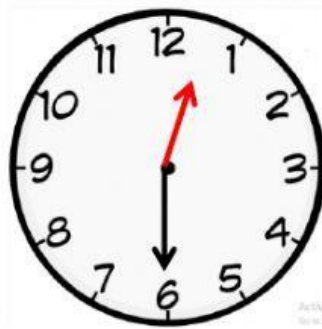
Class: \_\_\_\_\_

H.W

Write the time in the digital form :



A



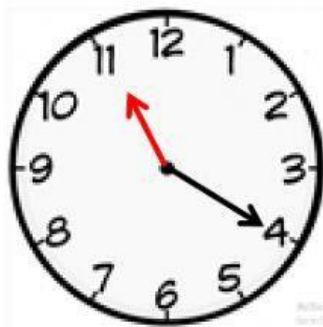
B

What time is on clock A? \_\_\_\_\_

What time is on clock B? \_\_\_\_\_

How much time has elapsed between

Clock A and Clock B ? \_\_\_\_\_



A



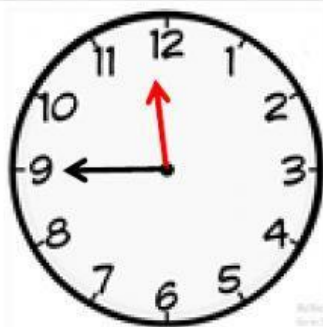
B

What time is on clock A? \_\_\_\_\_

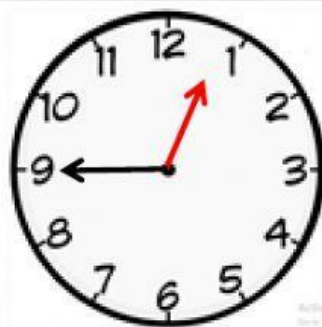
What time is on clock B? \_\_\_\_\_

How much time has elapsed between

Clock A and Clock B ? \_\_\_\_\_



A



B

What time is on clock A? \_\_\_\_\_

What time is on clock B? \_\_\_\_\_

How much time has elapsed between

Clock A and Clock B ? \_\_\_\_\_