

PHÉP TRỪ CÁC SỐ TRONG PHẠM VI 10 000 (Subtraction of Numbers within 10 000)

1.

Subtract.

a

$$\begin{array}{r} 8240 \\ - 3970 \\ \hline \end{array}$$

b

$$\begin{array}{r} 6130 \\ - 2580 \\ \hline \end{array}$$

c

$$\begin{array}{r} 9164 \\ - 5467 \\ \hline \end{array}$$

d

$$\begin{array}{r} 3210 \\ - 1789 \\ \hline \end{array}$$

e

$$\begin{array}{r} 2310 \\ - 1627 \\ \hline \end{array}$$

f

$$\begin{array}{r} 4692 \\ - 1893 \\ \hline \end{array}$$

2.

Find the missing numbers.

a

$$\begin{array}{r} 4583 \\ - 172 \\ \hline 2857 \end{array}$$

b

$$\begin{array}{r} 7 \square 51 \\ - 2619 \\ \hline 4832 \end{array}$$

$$\begin{array}{r} \square 000 \\ - 2643 \\ \hline 3357 \end{array}$$

3. Tính nhẩm (theo mẫu)

Mẫu: $5700 - 200 = 5500$

$8400 - 3000 = 5400$

$3600 - 600 =$

$6200 - 4000 =$

$7800 - 500 =$

$4100 - 1000 =$

$9500 - 100 =$

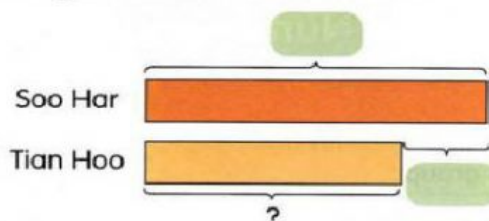
$5800 - 5000 =$

4. Tìm x, biết:

a. $9140 - x = 5452$

b. $x + 5432 = 6789$

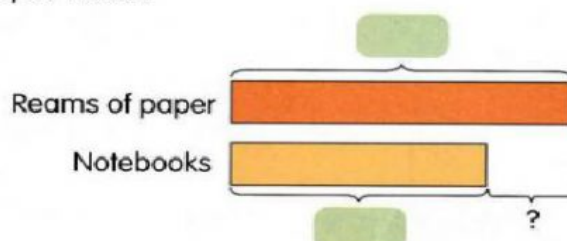
- 4 Soo Har harvested 4000 oranges on his farm.
Tian Hoo harvested 935 fewer oranges than Soo Har.
How many oranges did Tian Hoo harvest?



$$\text{ } - \text{ } = \text{ }$$

Tian Hoo harvested oranges.

- 5 A shopkeeper has 2000 reams of paper and 1726 notebooks.
How many more reams of paper than notebooks does the shopkeeper have?



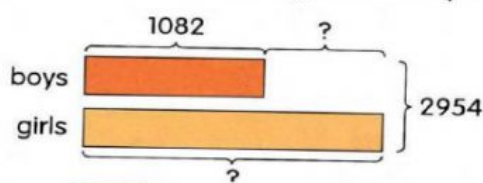
$$\text{ } - \text{ } = \text{ }$$

The shopkeeper has more reams of paper than notebooks.

6. This is the word problem that Googol wrote:
There were 2954 pupils in a school.
1082 pupils were boys.
How many pupils were girls?
How many fewer boys than girls were there?

58

Here is the model to solve Googol's word problem on page 58:



$$2954 - 1082 = \text{ }$$

pupils were girls.

$$\text{ } - 1082 = \text{ }$$

There were fewer boys than girls.



7. Một kho có 4720kg muối, lần đầu chuyển đi 2000kg muối, lần sau chuyển đi 1700kg muối. Hỏi trong kho còn lại bao nhiêu ki-lô-gam muối?
(Giải bằng 2 cách)

Cách 1

Cách 2

---Hết---