



**UĞUR SCHOOLS**  
**PRESCHOOL & PRIMARY SCHOOL**  
**ENGLISH LANGUAGE ACQUISITION**

NAME : \_\_\_\_\_  
SURNAME: \_\_\_\_\_  
CAMPUS: \_\_\_\_\_  
CLASS: \_\_\_\_\_  
NO: \_\_\_\_\_

MATERIAL NAME / TYPE	GRADE / LEVEL	ACADEMIC YEAR	
URT 2 PRACTICE TEST	GRADE 3	2021-2022	

**PART 1- LISTENING**

- Listen three times and answer the questions. An example has been done for you.
- Read the text and the questions first.

I get up at \_\_ 0 \_\_ every day. I brush my \_\_ (1) \_\_ at 8.30 and then I go to school. At 16.15 I take my dog for a walk. I do my homework at \_\_ (2) \_\_ and then I watch TV. I have \_\_ (3) \_\_ with my mum and dad. I go to bed at 21.15. My mum and dad watch TV at 21.45.

0. **A)** 8.15  
B) 8.45  
C) 8.30
1. A) hair  
B) teeth  
C) toes
2. A) 18.30  
B) 18.15  
C) 18.45
3. A) breakfast  
B) lunch  
C) dinner
4. Do mum and dad play chess?  
A) Yes, they do.  
B) No, they don't.  
C) We don't know.

**LIVE YOUR ENGLISH**



PART 2- LANGUAGE


5. Put the sentences in the correct order.

1. Yes, of course. How about some lemonade?
2. Yes, please. I like apple juice.
3. Sorry, I don't like lemonade.
4. I'm thirsty. Can I have something to drink, please?
5. Oh! How about some apple juice then?

- A) 4-1-3-5-2  
B) 2-3-4-1-5  
C) 5-4-3-2-1

6. Look at the picture. Which option is TRUE?

- A) There is some bread on the table.  
B) There aren't any apples on the table.  
C) There isn't any cake on the table.



7. Choose the WRONG option.



Tidy up



Sweep the floor



Dry the dishes







8. Look at the picture and answer the question.

What does she do every Sunday?

- A) She washes the dishes.
- B) She sweeps his bedroom.
- C) She does the shopping.



9. Look at the table and choose the best option.

What we do on Saturdays				
				
Rob	✓✓✓	✓	×	✓
Gillian	✓✓	✓✓✓	✓✓	×
✓✓✓ = always   ✓✓ = usually   ✓ = sometimes   × = never				

- A) Rob always goes to the cinema on Saturdays.
- B) Gillian usually plays tennis on Saturdays.
- C) Rob never does his homework on Saturdays.

10. Look at the picture and complete the sentence with the best option.

I come back home at \_\_\_\_\_ .

- A) half past four   B) five o'clock   C) twelve o'clock







11. Read the sentence and find the best option.

When you thirsty,  
you can drink. It is  
yellow and very  
healthy.



- A) lemonade    B) water    C) milk

PART 3- READING

Read the email and the questions 16-19. Then find the correct answers.

- 1 This is Adam. He goes to school and likes football. In Adam's family there are four people. His dad Tom, his mum Jane, his sister Joanna and Adam. They live in a small house. At the weekends, Adam helps his family with the household chores.
- 9 On Saturdays Adam makes his bed and sets the table for dinner. His dad goes shopping and his sister tidies up. Jane cooks and washes up. At the weekends, Adam's mum does the laundry and **his** dad does the ironing. Joanna and Adam help their parents with gardening on Sundays. They have a busy weekend.

12. Where does Adam live?

- A) In a small house.    B) In a big house.    C) In a village.



NAME :  
SURNAME:  
CAMPUS:  
CLASS:  
NO:

13. What does Adam do on Sundays?

- A) He washes up.      B) He goes shopping.      C) He does gardening.

14. Does Adam's mum cook at the weekend?

- A) No, she doesn't.      B) Yes, she does.      C) She can't cook.

15. Who does "his" in line 7 refer to?

- A) Adam's      B) Joanna's      C) Tom's

PART 4- SCIENCE

16. Which one is FALSE about force?

- A) Force can stop things moving.  
B) Force can make things change direction.  
C) Force can make you sleep.

17. Look at the picture. Which force does it show?

- A) Push      B) Catch      C) Pull



18. Complete the sentence with the best option.

Playing, running and walking are \_\_\_\_\_.

- A) a healthy diet      B) good exercises      C) an unhealthy diet



NAME :  
SURNAME :  
CAMPUS :  
CLASS :  
NO :


19. Look at the picture and complete the sentence.

They are \_\_\_\_\_ a giant turnip.

- A) pulling B) pushing C) looking at



20. Look at the red lego in the picture and choose the best option.



- A) Glass, shiny, smooth  
B) Plastic, hard, dull  
C) Metal, flexible, shiny

21. Friction is a force that happens when .....

- A) someone is sleeping.  
B) water touches your hands.  
C) surfaces rub together.

PART 5- MATHS

22. Which one is the correct answer when round "47" to the nearest ten?

- A) 40 B) 45 C) 50

23. A bus picks up 19 people at the first stop. At the second stop 8 people gets off and 11 people gets on. How many people are there on the bus now?

- A) Twenty- five B) Twenty- two C) Eleven





NAME :  
SURNAME :  
CAMPUS :  
CLASS :  
NO :

24. Look at the numbers. How many numbers are “multiples of 5”?

25- 32- 40- 58- 65- 70

A) 4    B) 3    C) 2

25. Look at the pictogram. How many children like strawberries?

Fruit	Favorite Fruit
 apple	    
 banana	      
 strawberry	  
 pear	 
 grapes	   



= 2 children

A) Six    B) Eight    C) Four

26. Put the numbers in order from the LARGEST to the SMALLEST.

222- 459- 600- 113- 406- 278

A) 113- 222- 278- 406- 459- 600

B) 600- 459- 406- 278- 222- 113

C) 406- 600- 222- 278- 113- 459