



LET'S ANSWER - ELECTRICAL CIRCUIT

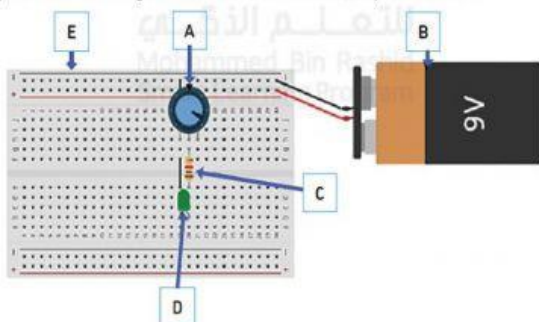
1:00



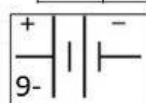
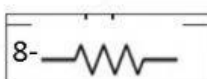
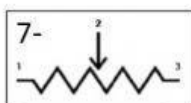
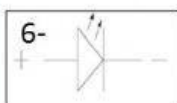
W 1 - LI- What is electricity

Activity 1.1.4

Study the electric circuit given below and then answer the questions below.



1- Battery 2- Breadboard 3- Potentiometer 4- Resistor 5- LED



Name:

Class:



Share your answer in the chat box



LIVEWORKSHEET

