



TEST



Banmaireab School – English Program

The Development of English Educational Management for Schools under the Phuket Provincial Administration
Project

Suan Sunandha Rajabhat University

Study subject: **MATHEMATICS**
Chapter: **Shapes & Length**
Study book: **Mathematics Textbook 2**

P1/ ____
Nickname: ____
Number: ____

1. Connect the words:

longest

สูงที่สุด

shortest

ยาวที่สุด

tallest

สั้นที่สุด

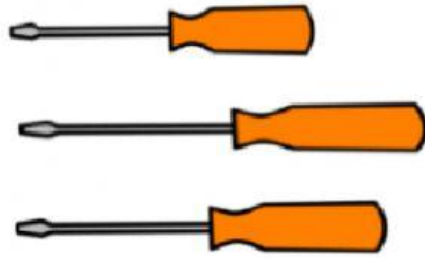
2. Circle the **taller** one.



3. Circle the **shorter** one.



4. Circle the **longest** one.



5. How many paper clips long is the pencil?



a. 3

b. 5

c. 7

6. How many centimeters long is the pencil?

(1 point)



a. 3 cm

b. 5 cm

c. 9 cm

7. How long is the eraser?




a. 1 cm

b. 3 cm

c. 6 cm

8.



What is the **height** of the couch? The couch is ____ centimeters **tall**.

What is the **length** of the couch? The couch is ____ centimeters **long**.

9. 1 meter = centimeters.

Choose < , > , =

2 cm 2 m

1 m 1 cm

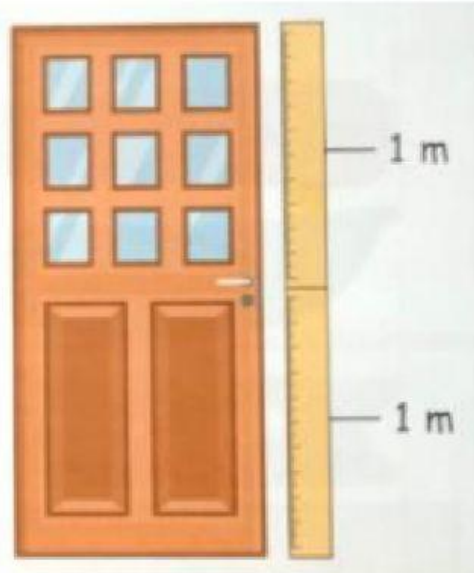
100 cm 1 m

10. How tall is the door? (Circle the answer)

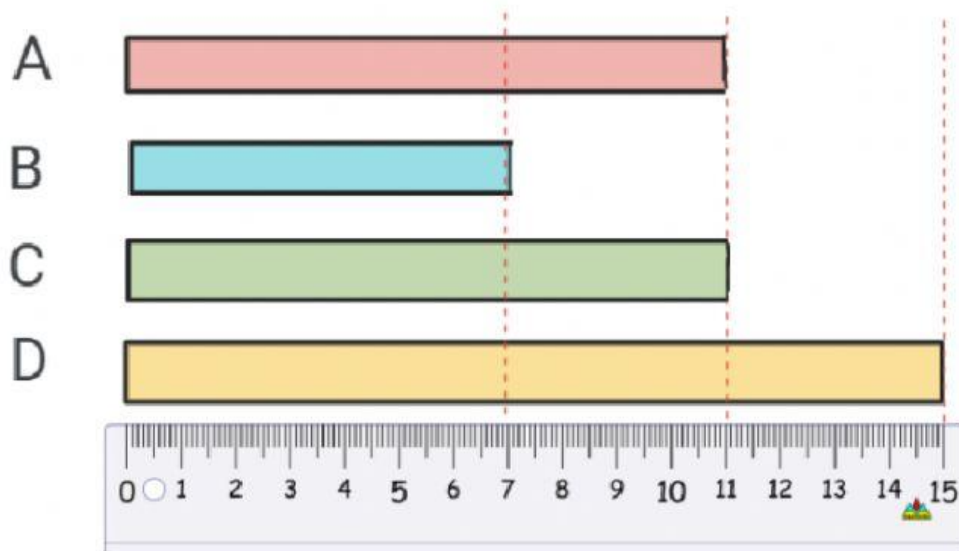
a. 1 meter

b. 2 meters

c. 2 centimeters



11.



A is ___ cm. B is ___ cm. C is ___ cm. D is ___ cm.

A is _____ B.

B is _____ D.

C is _____ A.

← shorter than longer than as long as

12. The bus is 7 meters. The car is 4 meters.

How much **longer** is the bus than the car?

→ $\square - \square = \square$

The bus is ___ meters **longer than** the car.

