

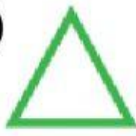
## Grade 1 Term 2 Quiz

1. Choose the triangle.


A)



B)



C)



D)



2. Which shape is it?



A) Square

B) Rectangle

C) Circle

D) Triangle

3. Choose the answers.

5 take away 2 is \_\_\_\_\_

6 minus 4 is \_\_\_\_\_

3 and 7 is \_\_\_\_\_ in all

4. Choose the subtraction.

A)  $2 + 2 = 4$

B)  $5 - 1 = 4$

5. Which is the name for the sign?



A) Plus

B) Minus


6.



2 is

\_\_\_\_\_

4



A) less than

B) greater than

7.

There are 5 cats.

4 more cats join.

How many cats are there in all?

Choose the correct number sentence for the story.

A)  $5 + 4 = 9$

B)  $5 - 4 = 1$

8.

Bob has 7 pencils.

He gives away 3 pencils.

How many pencils does Bob have left?

A) Bob has 4 pencils left.

B) Bob has 10 pencils left.