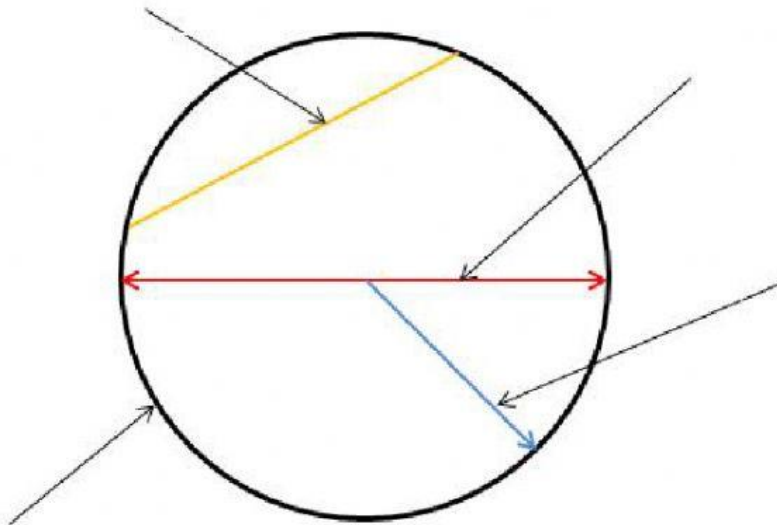


Nickname:

Quiz

Part 1: Drag and drop to correctly label the parts of the circle.



radius	chord	diameter	circumference
--------	-------	----------	---------------

Part 2: Match the correct formulas.

area of a circle (A)

$\pi \times \text{diameter}$   
or  $2 \times \pi \times \text{radius}$

area of a triangle (A)

$\text{side} \times \text{side}$

area of a square (A)

$\pi \times \text{radius}^2$

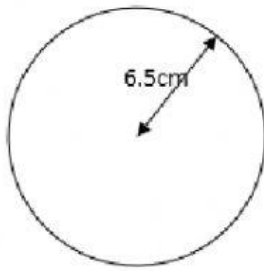
area of a trapezium (A)

$\frac{1}{2} \times (\text{base1} + \text{base2}) \times \text{height}$

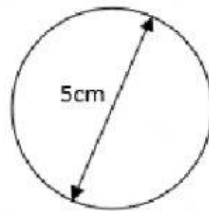
perimeter of a circle (P)

$\frac{1}{2} \times \text{base} \times \text{height}$

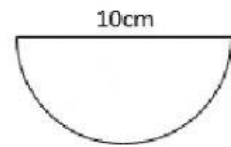
Part 3: Solve for the perimeter of the following:



**P =**

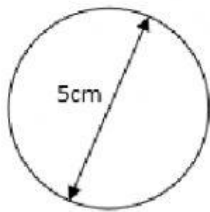


**P =**

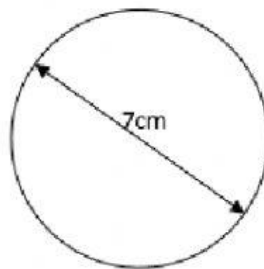


**P =**

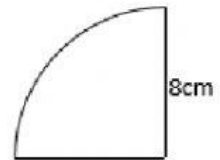
Part 4: Solve for the area of the following:



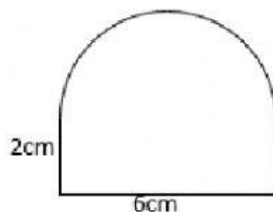
**A =**



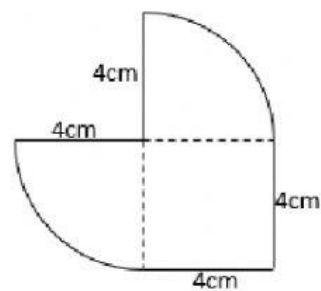
**A =**



**A =**



**A =**



**A =**