



Subject: Mathematics

Ay/Term 2nd Term, AY 2021 Score: \_\_\_\_\_

Topic: Circle

Worksheet No. \_\_\_\_\_ Date: \_\_\_\_\_

Student name: \_\_\_\_\_ Class: \_\_\_\_\_ Student No. \_\_\_\_\_



# Circle



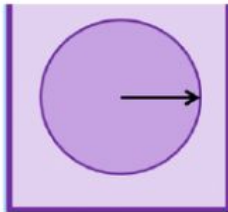
Write the parts of a circle.

CIRCUMFERENCE

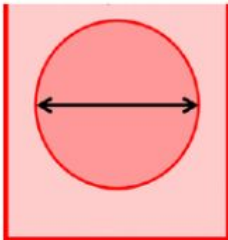
CHORD

RADIUS

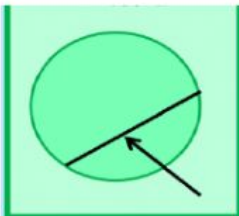
DIAMETER




1. \_\_\_\_\_



2. \_\_\_\_\_



3. \_\_\_\_\_



4. \_\_\_\_\_